

General and Quantitative Reasoning Ability

Based on the data in the following table, please answer the questions below:

General Elections	Year	Total Turnout (in %)	Men's Turnout (in %)	Women's Turnout (in %)	Women Members in Parliament
I	1952	61.2	-	-	22
II	1957	62.2	-	-	27
III	1962	55.4	63.3	46.6	34
IV	1967	61.3	66.7	55.5	31
V	1971	55.3	60.9	49.1	22
VI	1977	60.5	66	54.9	19
VII	1980	56.9	62.2	51.2	28
VIII	1984	64	68.4	59.2	44
IX	1989	62	66.1	57.3	28
X	1991	57	61.6	51.4	36
XI	1996	58	62.1	53.4	40
XII	1998	58.2	61.7	55.8	44
XIII	1999	60	64	55.7	48
XIV	2004	58.8	61.7	53.3	45
XV	2009	58.2	60.2	55.8	59
XVI	2014	66.4	67.1	65.6	61

Source: Rai, P. (2017). Women's Participation in Electoral Politics in India. *South Asia Research*, 37(1), 58-77.
doi:10.1177/0262728016675529

How many women members of parliament have been elected till 2014?

- A) 545
 - B) 543
 - C) 588
 - D) 643
-

In which years the number of women members of the parliament is lower than the previous general election?

- A) 1962, 1971, 1989, 2014, 1952
 - B) 1989, 2009, 2004, 1991, 1957
 - C) 1967, 1971, 1977, 1989, 2004
 - D) 2014, 1999, 1952, 1962, 1971
-

In _____, though the voting percentage of women voters was less than the previous year, the number of women parliamentarians was higher than the previous year.

- A) 1980 & 2014
 - B) 1980 & 1991
 - C) 2004 & 2014
 - D) 1967 & 1991
-

The difference between the men and women voters is highest during:

- A) III general election
 - B) V general election
 - C) IX general election
 - D) XV general election
-

Identify the correct statement:

- A) The voting percentage has decreased in 2014 compared to the previous general election
 - B) Comparing the 1991 and 2004 general elections, the women voter participation is highest in 1991 general election
 - C) The number of women parliamentarians in the year 1999 was higher than the previous general election
 - D) None of the above
-

The following is the data (in thousands) on distribution of deaths by age and gender in India between 2010 and 2013. Answer the questions that follow:

Distribution of Deaths by age and gender in India: 2010-2013						
Age Group	Deaths (%)					
	Male	Male %	Female	Female %	Person	Person %
0-1	10353	10.0	8532	10.8	18885	10.3
1-4	1920	1.9	1961	2.5	3881	2.1
5-14	1812	1.7	1570	2.0	3382	1.9
15-29	6693	6.5	5308	6.7	12001	6.6
30-34	3074	3.0	1609	2.0	4683	2.6
35-44	8175	7.9	3783	4.8	11958	6.5
45-54	11905	11.5	5489	6.9	17394	9.5
55-69	26426	25.5	18929	23.9	45355	24.8
70+	33309	32.1	31979	40.4	65288	35.7
Total	103667	100.0	79160	100.0	182827	100.0

(Source: https://censusindia.gov.in/vital_statistics/causesofdeath.html)

In which age groups, do females die less in comparison to males?

- A) 1-4, 30-34, 55-69
 - B) 45-54, 55-69, 70+
 - C) 30-34, 35-44, 70+
 - D) 30-34, 35-44, 45-54
-

What percentage of children die in the age group 0-4 years?

- A) 11.9
 - B) 13.3
 - C) 6.2
 - D) 12.4
-

In which age group, is the difference between percentage deaths of males and females the least?

- A) 70+
 - B) 45-54
 - C) 5-14
 - D) 1-4
-

For which two consecutive age groups is the percentage difference in deaths among persons the lowest?

- A) 35-44 to 45-54
 - B) 1-4 to 5-14
 - C) 15-29 to 30-34
 - D) 45-54 to 55-69
-

Which of the following statements is **not** true for the above table?

- A) Almost one-tenth of the children in our country die in the first year of their life
 - B) About 35% of the population of India survives beyond 70 years
 - C) Almost twice as many number of males die as number of females in the age group 35-54
 - D) The population of males in the age group 0-1 is about 1.03 lakhs
-

The following table shows the data of total number of drop-out children from school and the total number of school aged children in India for the years 2008 to 2012. The numbers shown here are in Lakhs.

Year	Drop-out(In Lakhs)		Total (In Lakhs)	
	Male	Female	Male	Female
2008	30	17	540	510
2009	44	20	680	550
2010	35	15	700	600
2011	44	15	660	600
2012	25	12	675	603

For which year, drop-out percentage among male students is the highest?

- A) 2008
- B) 2009
- C) 2010
- D) 2011

For which year, the difference in the drop-out percentage among male and female students is the highest?

- A) 2009
- B) 2010
- C) 2011
- D) 2012

For which year, the overall drop-out percentage among all students is the highest?

- A) 2008
- B) 2009
- C) 2010
- D) 2011 49)

What is the average drop-out percentage for all students during the years 2008-2011?

- A) 5.92
- B) 2.99
- C) 4.55
- D) 2.93

What is the average yearly dropout among male students for the five year period 2008-12?

- A) 36.5 Lakh
 - B) 35.6 Lakh
 - C) 32.3 Lakh
 - D) 37.5 Lakh
-

Read the following passage and answer the questions that follow:

India has witnessed a significant decline in the IMR (Infant Mortality Rate) in the last two decades, yet it contributes the highest number of neonatal, infant and under 5 deaths in the world. The Sample Registration System (SRS) data, which the government often uses for estimating IMR, shows a decline from 44 per 1,000 live births in 2011 to 33 in 2017.

The findings of successive NFHS (National Family and Health Survey) further corroborate the steady decline in IMR – from 57 per 1,000 live births in 2005–2006 to 41 in 2015–2016. The under-5 mortality rate (U5MR) which indicates the prospects of newborn survival till their fifth birthday, also showed a marked decline from 55 per 1,000 live births in 2011 to 39 in 2016. The NFHS-4 estimated a decline from 74 per 1,000 live births in 2005–2006 to 50 in 2015–2016.

Almost all studies conclude that the mortality rate among neonates, infants and children has declined but a child born in a remote rural area or an urban slum does not have the same chance of survival as a child born in a well-off household. The picture varies across different states in India, across rural and urban areas, across economic groups and social groups.

Indeed, the averages conceal significant inter and intra-state differentials in reduction in IMR and U5MR. Uttar Pradesh was at one end of spectrum with the highest IMR (73) and U5MR (96) in India and Kerala was at the other end with the lowest IMR (15) and U5MR (16) in 2005–06 (NFHS-3). The decline in U5MR has been uneven across states with 78 deaths per 1,000 live births in Uttar Pradesh as compared with 7 deaths per 1,000 live births in Kerala in 2015–2016 (NFHS 4). This is also reflected in the Young Child Outcomes Index. It brings forth these inter-state differentials with Kerala scoring as high as 0.858 and Bihar as low as 0.452 in the 2015–2016 Index that takes IMR into account in addition to stunting and net attendance at the primary level. The other states in the bottom five include Uttar Pradesh (0.460), Jharkhand (0.371), Madhya Pradesh (0.526), Chhattisgarh (0.55) all of which have an Index score lower than the all-India Index of 0.585. Goa (0.817), Tripura (0.761), Tamil Nadu (0.731) and Mizoram (0.719) are among the top five.

Chhattisgarh and Madhya Pradesh in the central region, Assam and Arunachal Pradesh in the north-east, Jharkhand, Orissa and Bihar in the east, and Rajasthan in the north have reported high levels of IMR and U5MR. In contrast, all states in south and west India fared much better. Indeed, the southern states, viz., Kerala, Tamil Nadu, Karnataka, Andhra Pradesh and Telangana with neonatal mortality rate (NMR) and IMR equivalent to developed countries have almost completed 'epidemiological transition,' which is characterised by a marked reduction in communicable, maternal, neonatal and nutritional diseases that have a major impact on child health.

(Source: State of young child in India, A report by Mobile Creches, 2020)

Of the decades between 2005-2006 and 2015-2016, which of the following statements are correct for the given passage?

- A) There was an increase of 41 live births per thousand
- B) 16 more children per thousand live births live upto their fifth birthday
- C) Kerala has managed to decrease its U5MR nearly by half
- D) In comparison to Kerala, around 70 more children die in Uttar Pradesh

The decline in IMR between 2011 and 2017 is

- A) 33 per thousand live birth
- B) 44 per thousand live births
- C) C) 11 per thousand live births
- D) 55 per thousand live births

The percentage decrease in U5MR during the period 2011 to 2016 is about

- A) 3% per 1000 live births
- B) 30% per 1000 live births
- C) C) 25% per 1000 live births
- D) 35% per 1000 live births

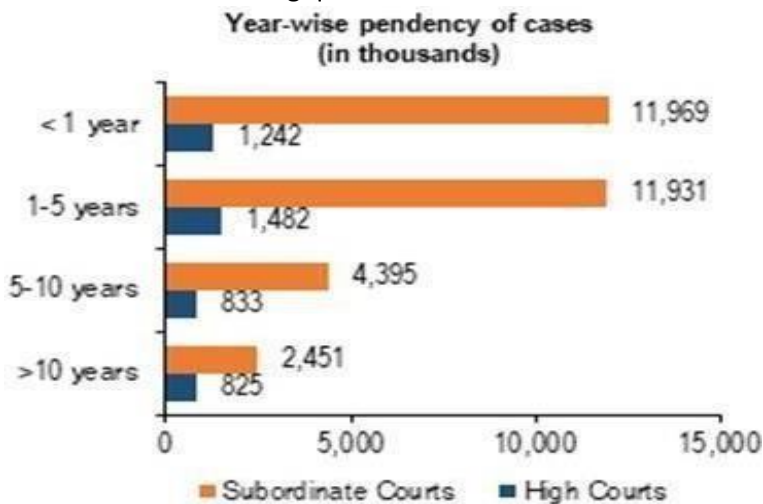
If we arrange the states by the Young Child Outcomes Index in an order of better to worse, which of the following would be a correct order?

- A) Tripura, Mizoram, Madhya Pradesh, Chattisgarh
- B) Jharkhand, Uttar Pradesh, Madhya Pradesh, Bihar
- C) Tamil Nadu, Mizoram, Tripura, Kerala
- D) Kerala, Goa, Tamil Nadu, Madhya Pradesh

The difference between IMR in Uttar Pradesh in 2005-2006 and the national average is

- A) 16 more deaths per 1000 live births
 - B) 31 more deaths per 1000 live births
 - C) 16 less deaths per 1000 live births
 - D) 29 more deaths per 1000 live births
-

The following figure gives the year-wise pendency of cases in Indian High Courts and Subordinate Courts. Please use the data to answer the following questions.



Source: Sinha, R. (2019). Examining pendency of cases in the Judiciary. *PRS India*. (<https://www.prsindia.org/theprsblog/examining-pendency-cases-judiciary>)

How many cases are pending in High Courts and Subordinate Courts of India for more than 10 years?

- A) 1,34,56,000
- B) 32,76,000
- C) 1,32,11,000
- D) 31,74,000

In Subordinate Courts, _____ number of cases are pending for more than a year.

- A) 12,42,000
- B) 1,19,69,000
- C) 1,87,77,000
- D) 1,19,31,000

Of all cases pending for less than a year, what proportion are pending in the High Court?

- A) 11.46%
- B) 12.78%
- C) 1.3%
- D) 9.4%

The highest number of cases pending in the courts are within the range of:

- A) <1 year
- B) 1-5 years
- C) 5-10 years
- D) >10 years

With respect to Subordinate Courts, what percentage of total cases are in the range of 5-10 years?

- A) 14.3%
 - B) 13%
 - C) 12.8%
 - D) 10.1%
-

Based on the paragraph below, answer the following questions.

In India the countrywide average of administering at least one dose of a Covid-19 vaccine to the total population is 53%. Data shows that of the 700 districts in India, 329 (47%) are yet to give even one vaccine dose to more than half their total population. Among large states, Uttar Pradesh and Bihar are the two worst performers in terms of administering at least one dose of a Covid-19 vaccine to their total population. More than 90% of the districts in both states are lagging the countrywide average. To be sure, the percentages for Maharashtra and Jharkhand, at 71% and 88%, respectively, are also poor. There are large disparities between states in terms of administering at least one dose of a Covid-19 vaccine to their total population. At one end of the scale are states like Himachal Pradesh, Sikkim and Goa, which had given one dose to around 75% of their total population by late-October. At the other end are Nagaland (32%), Meghalaya (33%) and Jharkhand (39%).

Adapted from: 1 Billion Vaccine Doses, But Women, Tribals Lag - By Lesley A. Esteves, Nushaiba Iqbal | 3 Nov, 2021 (<https://www.indiaspend.com/covid-19/1-billion-vaccine-doses-but-women-tribals-lag-785262>)

Which of the following states has the highest coverage of its population with at least one dose of vaccine?

- A) Maharashtra
- B) Uttar Pradesh
- C) Nagaland
- D) Sikkim

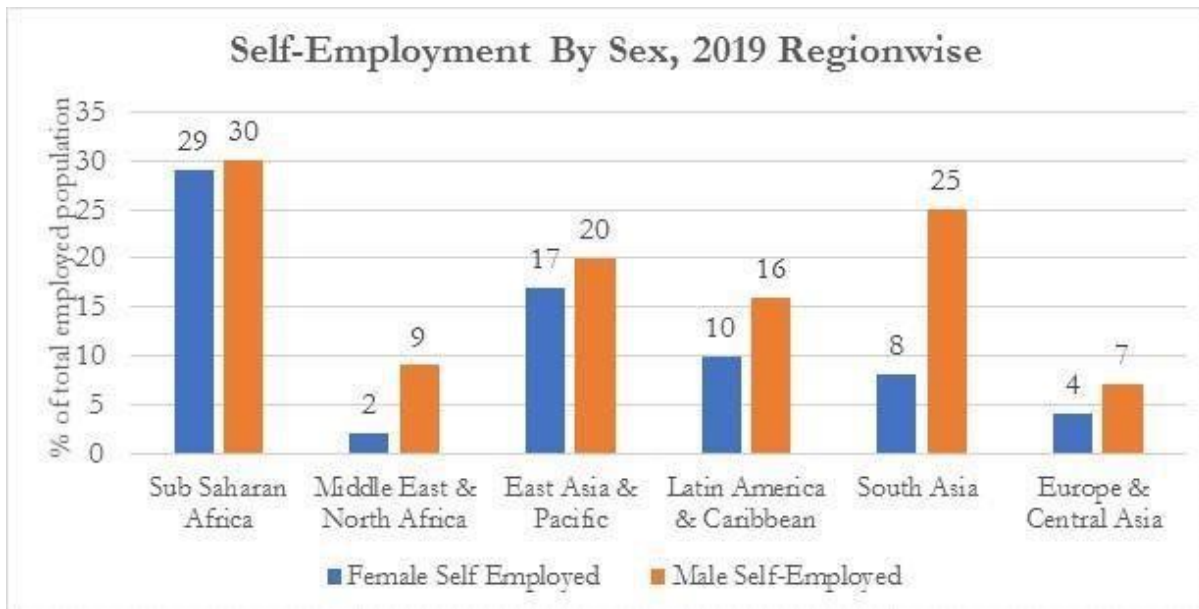
Which of the following statements is true?

- A) 88% of Jharkhand districts have less than 53% vaccinated population.
- B) More than 90% of the population in Bihar are not vaccinated.
- C) All the North Eastern States are performing poorly in terms of percentage of vaccinated population.
- D) Maharashtra has higher vaccination rates than the countrywide average.

How many districts have given at least one vaccine to more than half of their population?

- A) 329
 - B) 371
 - C) 350
 - D) 497
-

The chart shows the proportion of the employed population classified as self employed. The chart depicts the proportion of self employed male and female population in regions across the World Graph 1.



Which regions have less than five percent female self-employed population?

- A) (South Asia) and (Sub Saharan Africa)
- B) (East Asia & Pacific) and (Latin America & Caribbean)
- C) (Europe & Central Asia) and (Middle East & North Africa)
- D) (Sub Saharan Africa) and (East Asia & Pacific)

Which of the following correctly represents the 'gender gap in self-employability' ratio between (Europe & Central Asia) and (Latin America & Caribbean)?

- A) 2:1
- B) 1:2
- C) 5:8
- D) 6:9

Rank the regions in the increasing order of self-employment rate for females

1. Sub Saharan Africa
2. South Asia
3. East Asia and Pacific
4. Latin America and Caribbean
5. Europe and Central Asia
6. Middle East and North Africa

- A) 6, 5, 2, 4
- B) 6, 5, 2, 3
- C) 5, 2, 4, 3
- D) 5, 2, 4, 1

Table 1: The following table presents information on the number of elected representatives (including women elected representatives) to local bodies including gram panchayats, intermediate, and district panchayats for various years from 2001 to 2008 (in thousands). Answer the following questions from the table below.

Year	Gram Panchayats		Intermediate Panchayats		District Panchayats	
	Total	Women	Total	Women	Total	Women
2001	2739	685	140	15	14	3
2002	1630	548	72	23	11	4
2004	2065	838	109	47	12	5
2006	2656	975	156	58	16	6
2007	2645	975	156	58	16	6
2008	2645	974	156	58	16	6

Data Source: Ministry of Panchayati Raj.

In which year is the number of men among elected representatives to the gram panchayat the lowest?

- A) 2001
- B) 2002
- C) 2006
- D) 2008

The average number of elected women representatives in gram panchayats across all given years is:

- A) 43.2
- B) 131.5
- C) 832.5
- D) 2396.7

In which year is the proportion of elected women representatives to the gram panchayats the highest?

- A) 2001
- B) 2002
- C) 2004
- D) 2006

In which year is the total number of elected representatives to all local bodies the highest?

- A) 2008
- B) 2007
- C) 2006
- D) 2001

The following table presents information on food grain (cereals and pulses) and non-food grain/crop (including sugarcane, jute, cotton, tea, coffee, rubber, oilseeds, among others) production for various years from 2001 to 2014. Data Source: Ministry of Agriculture, Ministry of Commerce and Industry.

Year	Cereal (% total)	Pulses (% total)	Non-Food Crops (% total)
2001	33	2	65
2002	30	2	68
2003	36	3	61
2004	34	3	63
2005	32	3	65
2006	29	2	69
2007	30	2	68
2008	33	3	64
2009	31	3	66
2010	30	3	67
2011	31	2	67
2012	31	3	66
2013	31	3	66
2014	34	3	63

In which year is the gap between the percentage production in cereals and non-food crops the largest?

- A) 2007
- B) 2003
- C) 2006
- D) 2002

In which successive three-year period is there an increase in percentage of cereal production?

- A) 2012, 2013, 2014
- B) 2010, 2011, 2012
- C) 2007, 2008, 2009
- D) 2006, 2007, 2008

The number of years where the percentage production of non-food crops exceeds cereal production by a factor of 2 is:

- A) 7
- B) 8
- C) 9
- D) 10

In which of these years is the magnitude of year-to-year change in the percentage production of non-food crops the least?

- A) 2002 to 2003
 - B) 2010 to 2011
 - C) 2013 to 2014
 - D) 2007 to 2008
-

Based on the paragraph below, answer the following questions.

School closures due to the COVID-19 pandemic have had a devastating impact on the education of children who attend government schools. It is estimated that 82 percent of primary school children in government schools have lost foundational abilities in math, and 92 percent have lost language abilities. This is a major problem given that nearly 10 crore children (approximately 40 percent of the 26 crore school going population) are enrolled in government schools at the elementary level (Grade 1–8). Moreover, due to a loss of livelihoods and income, lakhs of migrant labourers working in cities have returned to their villages. With continuing uncertainty of livelihoods in cities, many workers are likely to enroll their children in rural government schools, making the situation even more challenging. In fact, a government school enrolment drive in Bihar in 2020 saw that nearly 11 percent of the 12.3 lakh children enrolled were from migrant families.

Source: Teacher shortages: A problem of distribution or scarcity? - MASHHOOD ALAM BHAT
(<https://idronline.org/article/education/addressing-teacher-shortage-in-government-schools/>)

Based on the excerpt, which of the following statements are true?

- A) About 4 out of 5 primary school children enrolled in government schools have lost their foundational math abilities.
- B) Educational loss is higher for children enrolled in government schools as compared to private schools.
- C) 1 in every 10 students enrolled in primary level in government schools have lost their language abilities.
- D) The problem of learning is more evident in mathematics.

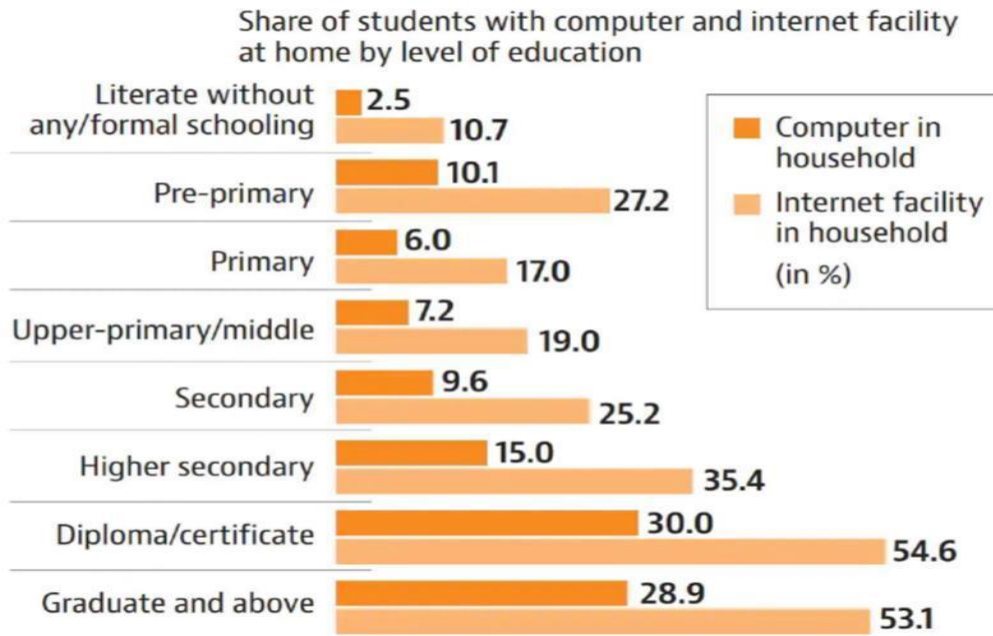
How many migrant children were enrolled in the Government Schools during the School Enrolment drive in Bihar in 2020?

- A) 10 lakh
- B) 12.3 lakh
- C) 1.3 lakh
- D) 12,400

What proportion of primary school going children are enrolled in non-governmental schools?

- A) 2/3
- B) 2/5
- C) 3/5
- D) Cannot be inferred from the given information

Answer the following questions based on the graph given here:



At what education level, the difference between having a computer in the household and having an internet facility in the household is maximum.

- A) Secondary
- B) Higher secondary
- C) Diploma/Certificate
- D) Graduate and above

At which level of education, the ratio between the percentage of computer to that of Internet facility in the household is minimum ?

- A) Literate without any/formal schooling
- B) Pre-primary
- C) Primary
- D) Secondary

Which one of the following statements is correct:

- A) More number of students are enrolled in Diploma Certificate program than Graduate Program.
- B) Across all levels of education, the percentage of students having internet facility at household is higher than the percentage having a computer.
- C) As the level of education increases, the percentage of students having internet facility also increases.
- D) As the level of education increases, the percentage of students having computer facility also increases

6 children are sitting in a circle. A sits next to D but not next C and B. B sits in- between D and F. Who sits adjacent to C?

- A) A and B
- B) D and E
- C) E and F
- D) Insufficient information

Buses travelling from Bangalore to Chennai usually make a stop at Vellore and another stop, just before reaching Chennai, at Sriperambadur.

Which of the following statements is a correct inference from the above statement?

- i) Sriperambadur lies in the middle of Bangalore and Chennai
 - ii) All buses travelling from Bangalore to Chennai makes a stop at Vellore
- A) Only (i) is true
 - B) Only (ii) is true
 - C) Both (i) and (ii) are true
 - D) Neither (i) or (ii) is true

Aarti, Apoorva, Anushka, Aparajitha and Ameena casted their votes to elect their class representative. Raju and Rani are the only 2 contestants. Aarti voted for Raju. Aparajitha and Ameena voted for Rani. Apoorva did not vote for Raju. One person was not allowed to vote. Who won the election?

- A) Rani
- B) Raju
- C) Election was a tie
- D) Not sufficient information

'Higher demand for commodities increases their price, leading to an inflation. Inflation and unemployment are negatively related.'

Which of the following can be concluded form the above statements.

- A) High demand for commodities causes unemployment
- B) Unemployment leads to lower demand
- C) Increase in demand reduces unemployment.
- D) None of the above.

A, B, C, D, E, F are living in a lane of 6 house. The lane has 3 houses on each side. As you enter the lane the first house on your left is B's who stays in front of D's house. C's house is in between the houses of A and B and in front of F's house. Who stays in front of A's house?

- A) C
- B) D
- C) E
- D) F

The following table presents information on factory employment for various years (in 10,000 persons) from 2000 to 2014 (including the annual growth rate in the number of factories). Data Source: Ministry of Labour and Employment. Answer the following based on the above data.

Year	Employed – Adult Men (in 10,000)	Employed – Adult Women (in 10,000)	Employed – Total (includes adult and non-adult) (in 10,000)	Annual Growth Rate in Factories (Percentage)
2000	198	21	219	-
2001	279	47	327	29.7
2002	278	54	333	-6.3
2003	190	23	213	-46.7
2004	290	63	355	51.6
2005	320	64	384	11.6
2006	362	73	437	9.2
2007	273	31	305	-50.8
2008	240	22	262	-35.6

2009	246	19	266	18.0
2010	396	73	471	61.9
2011	415	76	493	1.8
2012	333	66	400	-6.9
2013	117	14	131	-131.4
2014	272	29	302	80.5

What is the average number of women employed in factories for the given period?

- A) 281
- B) 516
- C) 326
- D) 45

In the following years, in which year is the difference in the numbers of employed men and women the highest?

- A) 2004
- B) 2000
- C) 2009
- D) 2014

What is the average number of non-adults employed in factories?

- A) 0
- B) 1
- C) 2
- D) 1.5

In which of the following two consecutive years does the number of factory employment among men increase despite a decrease in the growth rate of operating factories?

- A) 2005 and 2006
 - B) 2002 and 2003
 - C) 2008 and 2009
 - D) 2013 and 2014
-

Read the passage and answer the questions that follow on the basis of the information provided in the passage.

The following is a list of women members of an SHG. The age of each member is mentioned within parentheses following her name.

Parvati (32)
Seema (19)
Anjali (22)
Beena (25)
Libby (28)
Aalima (36)
Saima (41)
Vanshika (18)
Sitara (42) Kajori
(20)

What percentage of women are over 30 years?

- A) 40 per cent
- B) 50 per cent
- C) 60 per cent
- D) 80 per cent

What is the average age of the SHG women?

- A) 20 years
- B) 22 years
- C) 26 years
- D) 28 years

Read the passage and answer the questions that follow on the basis of the information provided in the passage.

Gauri, Gita and Garima live in Ghummar village. Preeta, Pallavi and Parvati live in Plashi. Gita is 142 cm tall. The average height of all 100 women in Ghummar village is 145 cm and of all 120 women living in Plashi village is 150 cm.

Which of the following statements is true?

- A) Gauri must be 5 cm shorter than Parvati
- B) Gauri could be taller than Parvati
- C) All women in Plashi are taller than women in Ghummar
- D) None of the above

Which of the following statements is true about the average height of women in Ghummar?

- A) Roughly half the women in Ghummar are taller than 145 cm and roughly half are shorter than 145 cm
- B) Gauri, Gita and Garima are probably malnourished
- C) Preeta and Pallavi are probably taller than Gita
- D) None of the above

Read the passage and answer the questions that follow on the basis of the information provided in the passage:

Polluted air is today the leading cause of premature deaths in the world. The concentration of particulate matter that is 10 microns or smaller (PM10) is an indicator of air pollution. The table below presents data from the Government of India on the average PM10 concentrations in states across India.

State	PM10 Annual average (micrograms per cubic metre)
Andhra Pradesh	72
Assam	72
Bihar	166
Chandigarh	110
Chhattisgarh	151
Delhi	237
Goa	96
Gujarat	94
Haryana	147
Himachal Pradesh	99
Jammu and Kashmir	119
Jharkhand	173
Karnataka	83
Kerala	55
Madhya Pradesh	128
Maharashtra	105
Meghalaya	73
Mizoram	54
Nagaland	86
Orissa	82
Punjab	162
Puducherry	42
Rajasthan	173
Tamil Nadu	73
Tamil Nadu	184
Uttarakhand	162
West Bengal	137

Which Indian state reported the highest level of air pollution?

- A) Goa
- B) Bihar
- C) Delhi
- D) Tamil Nadu

Which state has the lowest annual average concentrations of PM10?

- A) Kerala
- B) Mizoram
- C) Uttar Pradesh
- D) Tamil Nadu

Which of the following statement is true based on the above data?

- A) All air pollution monitoring stations in Kerala have lower concentrations than all such stations in Karnataka.
- B) The daily concentrations of PM10 in Puducherry is lower than its concentrations in Mizoram on every day of the year.
- C) On any given day, Assam and Andhra Pradesh can have different concentrations of PM10 particles in the air.
- D) Since air pollution in Karnataka is significantly lower than in Delhi, the concentrations of PM10 in Bangalore, the capital of Karnataka, must be significantly lower than in Delhi.

Which among the following regions of the country has the highest average concentrations of PM10? A)

- A) The Gangetic plains of north India
- B) The southern states
- C) North-eastern states
- D) The coastal states

Read the passage and answer the questions that follow on the basis of the information provided in the passage.

A street vendor sells bread-omelettes. His recipe for each plate of bread-omelette includes two slices of bread, two eggs, 10 gm of curry leaves, 100 gm of onions, and 100 gm of tomatoes. The cost of eggs and select vegetables in Bengaluru during the month of November is given in the table below. A packet of bread with 16 slices costs Rs. 32. Assume that costs of rent and kerosene factored per plate is Re. 1 and that the street vendor sells 200 plates of breadomelette a day.

Name	Price
Curry leaves	Rs. 46.00 (per kg)
Eggs	Rs. 5.00 (per egg)
Onions medium	Rs. 53.00 (per kg)
Tomatoes	Rs. 54.00 (per kg)

What is the cost to the street vendor for making each plate of bread omelette? A)

- A) Rs. 23.25
- B) Rs. 15.60
- C) Rs. 26.16
- D) Rs. 29.45

The cost of living for the street vendor's family of four is Rs. 15,000 per month. This includes house rent, school fees, food and essential public transport. If he works for 30 days a month, at what price must he sell each plate of bread omelette to just get by?

- A) Rs. 26.25
- B) Rs. 19.60
- C) Rs. 28.66
- D) Rs. 29.45

There is a health emergency in the street vendor's family. He has to borrow Rs. 5000 at an interest of 20 per cent per month, from the local money lender to pay the hospital bills and to buy medicines. By how much does the interest payment increase the street vendor's cost of living for the next five months? (You can ignore repayment of the principal).

- A) Rs. 500
- B) Rs. 1000
- C) Rs. 2000 D) Rs. 200

If the street vendor was able to sell his bread-omelettes for Rs. 40 per plate, what would be his month income?

- A) Rs. 40,000
 - B) Rs. 30,000
 - C) Rs. 1,00,000
 - D) Rs. 20,000
-

Read the passage and answer the questions that follow on the basis of the information provided in the passage.

The National Energy Policy (NEP) aims to chart the way forward to meet the Government's recent bold announcements in the energy domain. All the census villages are planned to be electrified by 2018, and universal electrification is to be achieved, with 24x7 electricity by 2022. The share of manufacturing in our GDP is to go up to 25 per cent from the present level of 16 per cent, while the Ministry of Petroleum is targeting reduction of oil imports by 10 per cent from the 2014-15 levels, both by 2022. India's commitments under the Paris Agreement on climate change target at reducing emissions intensity by 33-35 per cent by 2030 over the 2005 levels, achieving a 175 GW renewable energy capacity by 2022, and increasing the share of non-fossil fuel-based power generation capacity above 40% by 2030. (Excerpted with modifications from the Draft National Energy Policy, 2017).

What is the year with respect to which the energy intensity reduction of 33-35 per cent is planned?

- A) 2017
- B) 2022
- C) 2030
- D) 2005

By which year is India expected to achieve universal electrification?

- A) 2018
- B) 2022
- C) 2014-15
- D) 2030

What is the share of non-fossil fuel-based power generation capacity expected to be by the year 2030?

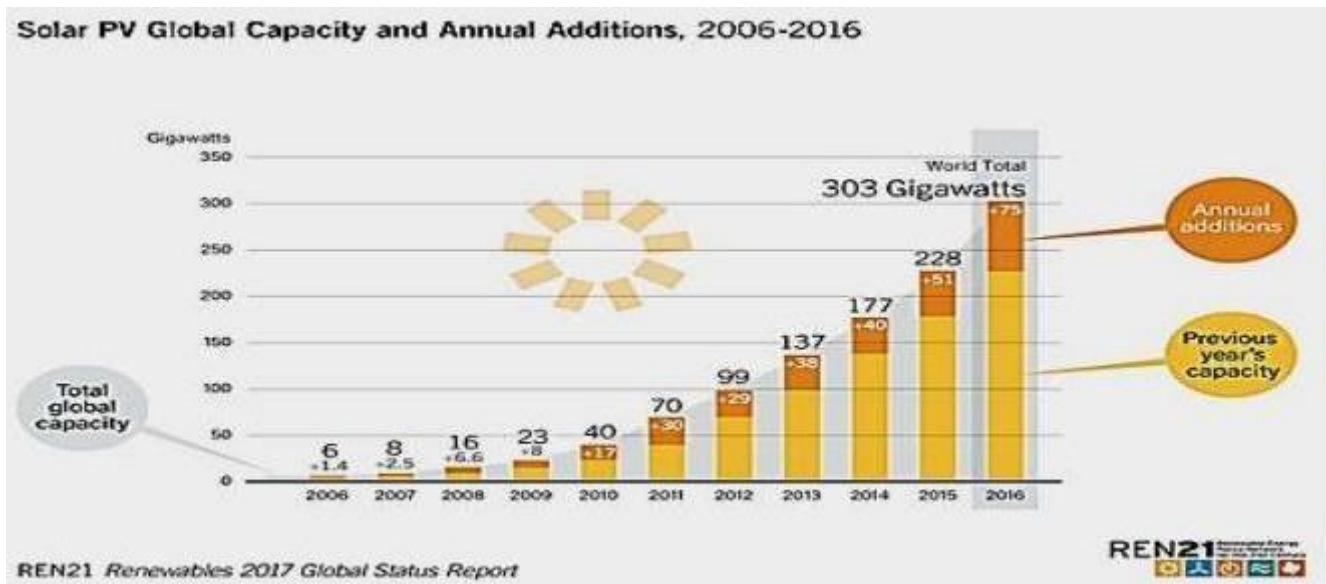
- A) Above 40%
- B) Below 40%
- C) 33% to 35%
- D) None of the above

Which of the following is NOT correct?

- A) The National Energy Policy aims to realise electricity access for everyone in India.
- B) Reduction of oil imports is a focus of the National Energy Policy.
- C) A significant expansion of renewable energy capacity can be expected as a result of this policy.
- D) The primary purpose of the National Energy Policy is to mitigate climate change.

Read the following information and answer the questions that follow:

Following chart represents data on the annual global addition of solar photovoltaic capacity between 2006 and 2016.



How much solar photovoltaic capacity was added in 2010?

- A) 40 Gigawatts
- B) 17 Gigawatts
- C) 23 Gigawatts
- D) 30 Gigawatts

What was the rate of growth of photovoltaic capacity addition from 2015 to 2016?

- A) 15 per cent
- B) 28 per cent
- C) 32 per cent
- D) 45 per cent

Roughly speaking, how many years does it take for photovoltaic capacity to double over the duration for which this graph presents data?

- A) One year
- B) Two years
- C) Five years
- D) Ten years

In percentage terms, which year recorded the highest additions of photovoltaic capacity?

- A) 2006-07
 - B) 2015-16
 - C) 2007-08
 - D) 2010-11
-

Child labour increases due to increase in school dropout rates. School dropout rates are high due to prolonged closure of schools.

Which of the following conclusions will hold true in the light of the above two sentences?

- A) Prolonged closure of schools leads to increase in child labour.
 - B) If schools are not closed for prolonged time, the school dropout rate decreases.
 - C) School dropout rate increases due to increase in child labour.
 - D) School dropout rates increase due to prolonged closure of school and due to child labour.
-

A University offers programmes in Development, Education and Public Policy. All public policy graduates understand development. All education graduates understand development. Some development graduates understand public policy.

Which of the following options is the best conclusion that can be drawn from the above statements?

- A) Some public policy graduates understand education.
 - B) All public policy graduates understand development and education.
 - C) All development graduates understand public policy.
 - D) Some education graduates understand development.
-

A train from Delhi will pass through Kanpur central station and stop for a while at Prayagraj station before ending the trip at Patna.

Which of the following statements is a correct inference from the above statement?

- i. No train to Patna from Delhi stops at Prayagraj.
 - ii. All trains ending the trip at Patna will stop at Kanpur central
- A) Only (i) is true
 - B) Only (ii) is true
 - C) Neither (i) nor (ii) are true
 - D) Both (i) and (ii) are true
-

Climate activists argue that developing countries are not doing enough to reduce their carbon footprint. Developing countries insist on being treated differently from developed countries with respect to commitments on reducing carbon footprints.

In this argument, the statement "Developing countries insist on being..." is a/an

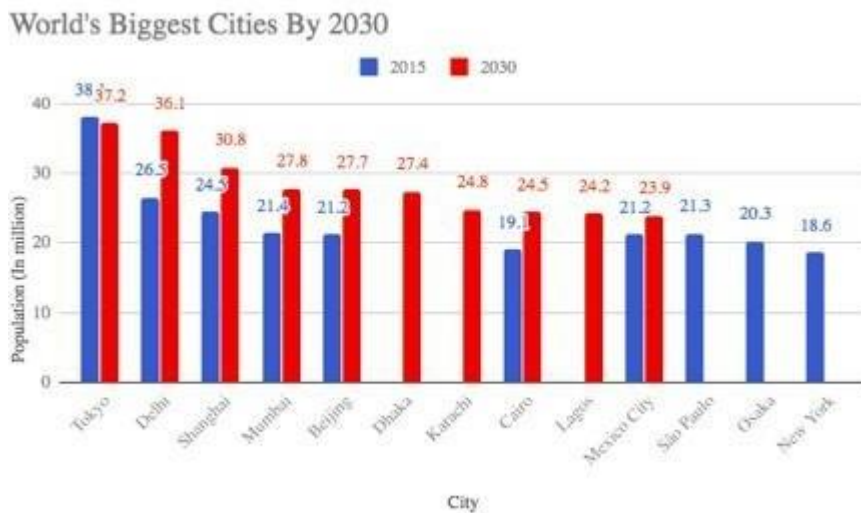
- A) conclusion
- B) explanation
- C) evidence to the conclusion
- D) illustration

The Reserve Bank of India may increase the repo rates and Cash reserve ratio rate when the inflation rate is high. The revision happens every quarter. It is expected that the repo rate will be increased next quarter.

Which of the following can be inferred from the above statements?

- A) Inflation rate is high in the current quarter.
- B) High inflation rate reduces cash reserve ratio rate.
- C) As the repo rate decreases, the cash reserve ratio will increase.
- D) Repo rate, Cash reserve ratio are not connected to inflation

The following graph shows a comparison between the population of a few important cities in 2015 and 2030. Answer the following questions based on the graph.



Source: ***In 2030, 39% of India's Population Will Be Urban***, SHREYA SHAH NOVEMBER 23, 2017, Indiaspend.com

Which city had the least urban population in the year 2015?

- a. Mexico City
- b. Cairo
- c. Sao Paulo
- d. New York

Which of the cities show the largest increase in urban population from 2015 to 2030?

- a. Cairo
- b. Mumbai
- c. Delhi
- d. Shanghai

Which of the following statement is true?

- Mumbai will have a greater increase in the urban population by 2030 than Delhi.
- Mumbai's urban population is comparable to that of Beijing.
- Mumbai exceeds Shanghai in terms of urbanization.
- Delhi will have the largest urban population.

The table below gives the Minimum Support Prices (MSP) of a selected few Rabi and Kharif crops. Answer the following questions based on the table.

Table: Minimum Support Prices - Fixed by Government (Rs per quintal)

Commodity	2014-15	2015-16	2016-17	2017-18	2018-19	2019-20	2020-21
KHARIF CROPS							
PADDY	1360	1410	1470	1550	1750	1815	1868
JOWAR	1530	1570	1625	1700	2430	2550	2620
BAJRA	1250	1275	1330	1425	1950	2000	2150
MAIZE	1310	1325	1365	1425	1700	1760	1850
RAGI	1550	1650	1725	1900	2897	3150	3295
Tur (Arhar)	4350	4625	5050	5450	5675	5800	6000
MOONG	4600	4850	5225	5575	6975	7050	7196
URAD	4350	4625	5000	5400	5600	5700	6000
COTTON	3750	3800	3860	4020	5150	5255	5515
RABICROPS							
WHEAT	1450	1525	1625	1735	1840	1925	1975
BARLEY	1150	1225	1325	1410	1440	1525	1600

GRAM	3175	3500	4000	4400	4620	4875	5100
MASUR (LENTIL)	3075	3400	3950	4250	4475	4800	5100
JUTE	2400	2700	3200	3500	3700	3950	4225

Source: Department of Agriculture, Cooperation and Farmers Welfare, Govt of India.

On an average the MSP for which of the following is the highest?

- Maize
- Paddy
- Jowar
- Bajra

Between Cotton and Jute, which has a higher increase in the MSP from 2014-15 to 2020-21?

- Cotton
- Jute
- Both are same
- Cannot say

Given the MSPs of the five pulses – Moong, Urad, Tur, Masur, and Gram, which one will have the highest market price?

- Moong
- Tur
- Urad
- Cannot be determined from given data

Read the paragraph and answer the following questions.

As per the 2011 Census, Karnataka has a total population of 61,130,704; it was 52,850,562 in the 2001 Census. In the total population of Karnataka, male population is 31,057,742 and the female population is 30,072,962. The area of Karnataka is 191,791 sq. km with a density of 319 person per sq km. The Sex Ratio in Karnataka is 968 for each 1000 male and has increased since the last census of 2001 in which it was 964 per 1000 males. The child sex ratio is 943 per 1000 males and has decreased from 973 in the 2001 census. Literate population in 2011 is 41,029,323 out of which 22,808,468 are males and 18,220,855 are females.

(Source: <https://www.census2011.co.in/census/state/karnataka.html>)

What is the sex ratio in Karnataka in the year 2011?

- (a) 943 per 1000 males
- (b) 964 per 1000 males
- (c) 968 per 1000 males
- (d) 973 per 1000 males

What is the population growth of Karnataka (in percentage) from the last census?

- (a) 50%
- (b) 30%
- (c) 25%
- (d) 15%

Based on the narrative, which of the following statements is true?

- (a) Karnataka has a higher literacy rate for females as compared to males.
 - (b) While the sex-ratio has increased in 2011 as compared to 2001, child sex-ratio has decreased.
 - (c) Karnataka is the largest State in India, in terms of population density.
 - (d) Literacy rates in Karnataka are one of the highest in India.
-

Read the following two statements and identify the correct cause and effect relationship:

- I. There is a significant rise in the enrolments of students at government schools.
- II. COVID -19 has devastated the livelihoods of many people in the country.

- a) Statement I is the cause and statement II is its effect
 - b) Statement II is the cause and statement I is its effect
 - c) Both the statements I and II are independent causes
 - d) Both the statements I and II are effects of independent causes
-

“Delhi is the city to move to - it has the lowest taxes.”

Which of the following assumption can be made from the above statement?

- a) Lower taxes imply efficient democracy.
 - b) Delhi is the most sought-after city for living.
 - c) Most of the residents in Delhi are content with their government.
 - d) Before deciding where to live, it is important to choose low tax cities.
-

What best inference can be drawn from the following passage?

One hundred and three students of master's in education programme have been to Udham Singh Nagar for Field Practice - 3. During this visit, some students voluntarily attended a recent weekend student conference in Udham Singh Nagar. At this conference, the topic of NEP – 2020 and the roadmap to meet the recommendations were discussed.

- a) The students discussed mainly the demerits of the NEP – 2020 document.
 - b) Some students felt it is worthwhile to understand the nuances of NEP – 2020.
 - c) The students who did NOT attend this conference showed no interest in NEP – 2020.
 - d) Most of the students who have attended are interested in working with Educational NGOs.
-

Smallholders, local communities, and Indigenous Peoples own or manage at least 4.35 billion hectares of forest and farmland. Family farmers account for 80 percent of world food production, and those holding less than 2 hectares of land account for 35 percent. In many countries, up to 90 percent of forest enterprises are small or medium-sized; such enterprises generate more than half of forest-related employment.

What proportion of the total employment in the sector does small and medium sized forest enterprises generate?

- a) More than 75 percent
 - b) Less than 25 percent
 - c) More than 50 percent
 - d) Less than 75 percent
-

Why should the Right to Education act (The Right of Children to Free and Compulsory Education) be implemented? Identify the strong argument from the following.

- a) Because education liberates human beings.
 - b) Because children get an opportunity to play at school.
 - c) Because parents do NOT have time to spend with children.
 - d) Because school provides an opportunity for children to learn songs and cheers.
-

Following table shows the distribution of Anganwadi centers, creche and workers in Anganwadi across five districts of Karnataka (2020-21). Answer the questions that follow.

District	Creche	Number of Children	Anganwadi located in own Building	Number of Anganwadi workers	Total number of Anganwadis
Belagavi	104	2600	3181	5174	5331
Haveri	8	200	1435	1902	1918
Kolar	12	300	1122	2080	2080
Chitradurga	45	1125	1724	2324	2333
Shivamogga	29	725	1917	2439	2439

Source: Karnataka at a glance

Average number of children per creche Chitradurga

- a) 22
- b) 24
- c) 23
- d) 25

Percentage of Anganwadis located in own building in Kolar

- a) 66.5%
- b) 53.94%
- c) 74%
- d) 79%

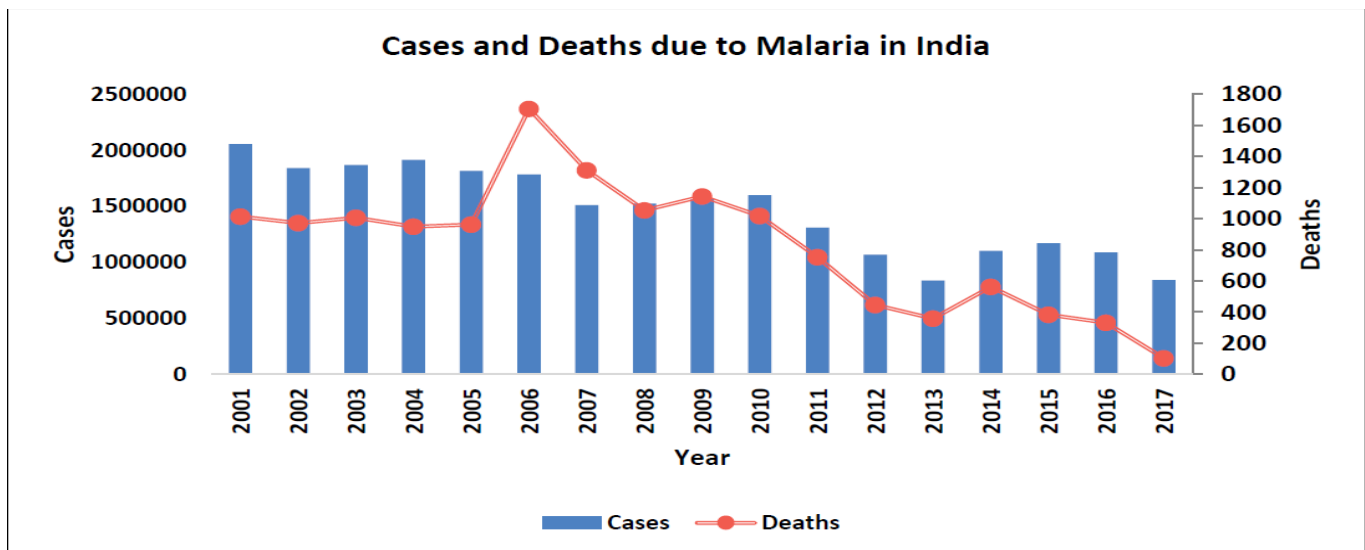
Anganwadis with shortage of workers in descending order (Each Anganwadi should have one Anganwadi worker)

- A. Belagavi B. Haveri
- C. Kolar D. Chitradurga

E. Shivamogga

- a) B, A, D
- b) A, B, D
- c) B, D, A
- d) D, B, A

The graph below shows the number of cases of malaria and deaths due to malaria in India between the years 2001 and 2017. Study the graph carefully and answer the questions that follow.



(Source: National Health Profile, 2018. Central Bureau of Health Intelligence, Ministry of Health and Family Welfare, Government of India)

In which year was the number of deaths almost quarter of the number of deaths in 2006?

- a) 2005
- b) 2009
- c) 2011
- d) 2013

Which of the following statements is true?

- a) In 2009, the number of cases were same as the number of deaths.
- b) The number of deaths in 2004 and 2005 are almost equal.
- c) The number of deaths in 2006 is more than the number of cases in 2001.
- d) The number of deaths due to malaria have shown a decreasing trend after the year 2006.

In which of the following years is there a successive decrease in the number of cases of malaria?

- a) 2004, 2005, 2006
 - b) 2007, 2008, 2009
 - c) 2010, 2011, 2012
 - d) 2012, 2013, 2014
-

Read the following passage and answer the questions that follow.

The attainment of upper secondary education has become a minimum requirement for navigating the modern economy and society. In most OECD and partner countries, the majority of younger adults (25-34 year olds) have attained at least upper secondary education. On average across OECD countries, 31% of older adults (55-64 year olds) did not attain an upper secondary qualification, but this share falls to 15% among younger adults (25-34 year olds). In all OECD member and partner countries except Estonia, Latvia and Lithuania, 25-34 year-olds are more likely to have completed at least an upper secondary education than 55-64 year olds. On average, across OECD countries, the share of younger adults with below upper secondary education as their highest level of education has decreased from 20% in 2009 to 15% in 2019. The decrease has been more remarkable in countries which initially had a high share of younger adults lacking upper secondary education in 2009 and this share had dropped by at least 10 percentage points over the last decade. In Spain, the share of 25-34 year olds without upper secondary education was also high in 2009 but it only fell by 5 percentage points between 2009 and 2019 and it remains at 30%. Norway is the only country with comparable data for 2009 and 2019 where the proportion of younger adults with below upper secondary education increased over the last decade.

(Source: Education at a Glance, 2020, OECD)

Which of the following countries showed an increase in the proportion of younger adults with below upper secondary education from 2009 to 2019?

- a) Spain
- b) Norway
- c) Lithuania
- d) Latvia

Across the OECD countries, what is the average percentage decrease in younger adults (25-34-year-olds) with below upper secondary education as their highest level of education over the period 2009-2019?

- a) 5%
- b) 10%
- c) 15%
- d) 31%

Which of the following statements is true about OECD countries?

- a) Majority of older adults have attained upper secondary education.
- b) Roughly 1/3 population of older adults have not completed an upper secondary education.
- c) Majority of younger adults have not attained upper secondary education.
- d) In Latvia, 25-34 year-olds are more likely to have completed upper secondary education.

Which of the following is an indicator of ability of a country to successfully navigate the modern economy?

- a) Increase in the percentage of younger adults with below upper secondary education.
 - b) Decrease in the percentage of younger adults with below upper secondary education.
 - c) Increase in the percentage of older adults with below upper secondary education.
 - d) Decrease in the percentage of older adults with above upper secondary education
-

What best conclusion can be drawn from the following statement?

Bengaluru rains are beautiful, yet all rainy days are NOT beautiful. Therefore _____.

- a) No clear days are beautiful in Bengaluru.
 - b) Some clear days are beautiful in Bengaluru.
 - c) All clear days are NOT beautiful in Bengaluru.
 - d) Some rainy days in Bengaluru are NOT beautiful.
-

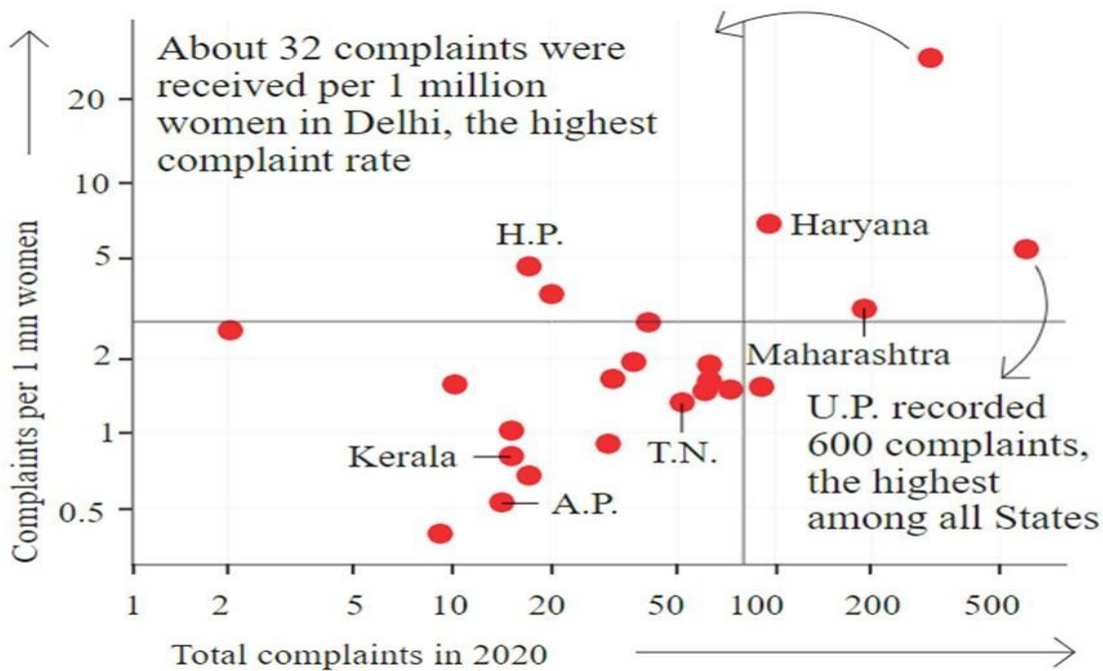
The different parts of the house like kitchen, washroom, and toilets get water supply from the water tank fixed on the terrace. In this statement, the water tank is analogous to which of the following?

- a) Kidney
- b) Brain
- c) Liver
- d) Heart

In 2022, Lokniti Programme of the Centre for the Study of Developing Societies, in partnership with Konrad Adenauer Stiftung (KAS) conducted a survey on Indian news consumption in 19 States among 7,463 citizens aged 15 years and above. The survey reveals that three out of every four homes have a television set, close to one in four gets a newspaper daily or often and 13% of homes get magazines periodically or often. There is a music system or a transistor in 22% of homes, whereas 76% have at least one smartphone owning member.

What percentage of homes own a television set?

- a) 25 percent
- b) 30 percent
- c) 75 percent
- d) 50 percent



Source: The Hindu

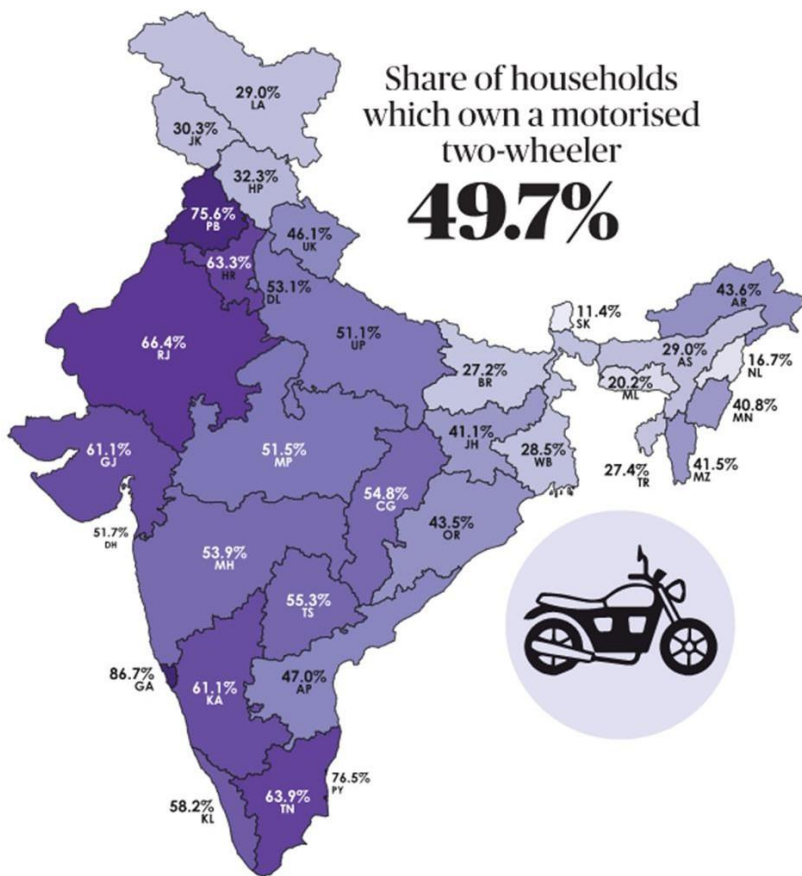
Which state in India has both the highest number of complaints and the highest complaints per 1 mn women?

- a) Maharashtra
- b) Haryana
- c) Uttar Pradesh
- d) Tamil Nadu

Which among the answer option is true of the total complaints from Delhi in 2020?

The total number of complaints are in the range of

- a) 20 to 200
- b) 100 to 200
- c) 200 to 600
- d) 100 to 150



Which part of India has less than the national average proportion of households owning a motorised two-wheeler?

- a) North-East Region
- b) Western Region
- c) Region including Jammu Kashmir, Ladakh and Himachal Pradesh
- d) Both Option a and c

Which is true of the map showing proportion of households owning a motorbike?

- a) The lighter the colour in the map the higher is the proportion of households owning motorcycle.
 - b) The darker the colour on the map, the higher the proportion of households owning motorcycle.
 - c) The darker the colour on the map, the lower the proportion of households.
 - d) The shade of colour on the map has no relation to the number of households owning motorcycle
-

The following table shows the experience of domestic violence among women by their partners according to the National Family Health Survey (NFHS). The table shows the comparison between two rounds of NFHS, i.e. Round 4 which was conducted between 2015-16 and Round-5 conducted between 2019-20. Answer the questions from the following table

State	NFHS-4 2015-16	NFHS-5 2019-20
Assam	24.5	32
Manipur	53.2	39.6
Meghalaya	28.8	16
Nagaland	13.1	6.4
Sikkim	2.6	12.2
Mizoram	17.1	10.9

Source: NFHS-5 factsheet

- A. Assam
- B. Manipur
- C. Meghalaya
- D. Nagaland
- E. Sikkim
- F. Mizoram

State/States where the percentage of domestic violence experienced by women has increased

- a) Only A
- b) A&C
- c) E & B
- d) A & E

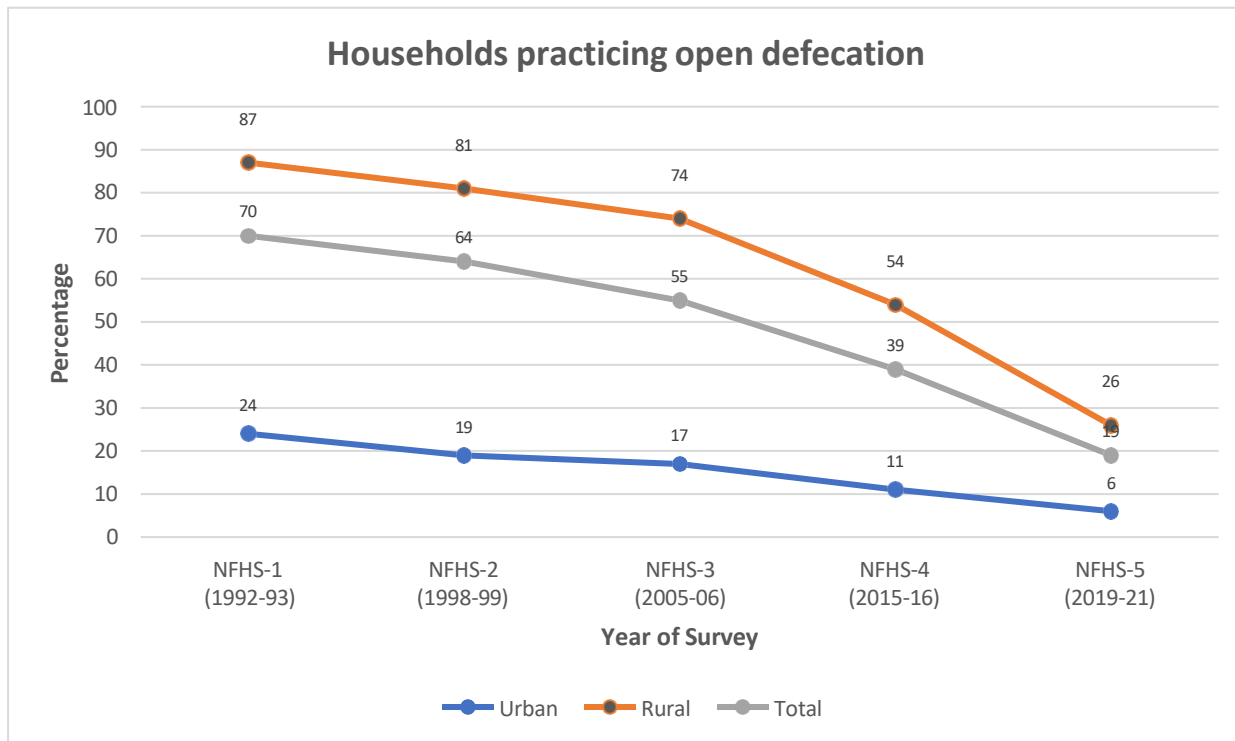
States with descending order of percentage change in domestic violence

- a) A, B, C, D
 - b) B, C, D, F
 - c) B, D, F, E
 - d) F, B, C, D
-

State with the greatest percentage decline in domestic violence between NFHS-4 & NFHS-5

- a) D
- b) B
- c) C
- d) F

The chart shows the proportion of households practicing open defecation by Rural, Urban and Total from 1993 to 2021 across five rounds of the National Family Health Survey.



Source: The Hindu

Greatest percentage reduction in households (Total) practicing open defecation, relative to the previous round was in

- a) NFHS-1 (1992-93)
 - b) NFHS-3 (2005-06)
 - c) NFHS-4 (2015-16)
 - d) NFHS-5 (2019-21)
-
- A. In NFHS-3 (2005-06), for every 229 households practicing open defecation in urban areas there are 1000 households practicing open defecation in rural areas
 - B. In NFHS-3 (2005-06), for every 1000 households practicing open defecation in urban areas there are 229 households practicing open defecation in rural areas
 - C. In NFHS-1 (1992-93), for every 1000 households practicing open defecation in urban areas there are 275 households practicing open defecation in rural areas

D. In NFHS-1 (1992-93), for every 275 households practicing open defecation in urban areas there are 1000 households practicing open defecation in rural areas

The following statements are true

- a) Only D
- b) Only A
- c) B & D
- d) A & D

Among the Urban households practicing open defecation, in which year was the lowest decline (relative to the previous round)

- a) NFHS-1 (1992-93)
- b) NFHS-3 (2005-06)
- c) NFHS-4 (2015-16)
- d) NFHS-5 (2019-21)

The following table shows the sex wise population (in lakhs) from 2011 to 2022 from five districts of Karnataka. Answer the following questions from the Table

District	2011		2022	
	Male	Female	Male	Female
Belagavi	24.2	23.6	27.8	27.1
Bagalkot	9.5	9.4	11.1	10.9
Vijayapura	11.1	10.7	13.7	13.1
Kalburgi	13	12.6	15.6	15.2
Bidar	8.7	8.3	10	9.6

Source: Karnataka at a glance

Percentage rise in overall Population of Bidar from 2011 to 2022

- a) 14.7
- b) 13.2
- c) 16.8
- d) 15.3

Percentage rise in the overall population of women from five districts from 2011 to 2022

- a) 15.7
 - b) 13.2
 - c) 17.5
 - d) 19.3
-

Read the following statements and answer the question that follows.

Statement 1: Covid 19 led to school closures and many schools shifted to online teaching.

Statement 2: During the Covid 19 period, school children reported learning losses.

Which of the following conclusions can be drawn from above two statements?

- (i) Online teaching is not a good alternative to prepare for competitive exams
- (ii) Online teaching could not produce same learning outcomes as that of offline teaching

- a) Only (i)
- b) Only (ii)
- c) Both (i) and (ii)
- d) Neither (i) nor (ii)

Statements

- I. The University authorities has instructed all colleges under its jurisdiction to ban the use of chatGPT in educational institutions
- II. Majority of teachers in colleges complained to the university about students using chatGPT for assignments

- a) Statement I is the cause and statement II is its effect.
- b) Statement II is the cause and statement I is its effect.
- c) Both the statements I and II are independent causes.
- d) Both the statements I and II are effects

There are seven Health and Wellness Centres (HWCs) in a Block. The pharmacist wishes to stock 1,000 Oral Rehydration Salt (ORS) packets at each of the HWCs. They already have 2000 ORS packets at Block-level, and 100 ORS packets at each of the HWC. How many more packets will be required from the District Drug Store?

- a) 7000
- b) 4300
- c) 5000
- d) 4900

During a viral infection, the immune system raises the body temperature as a way to fight the infection.

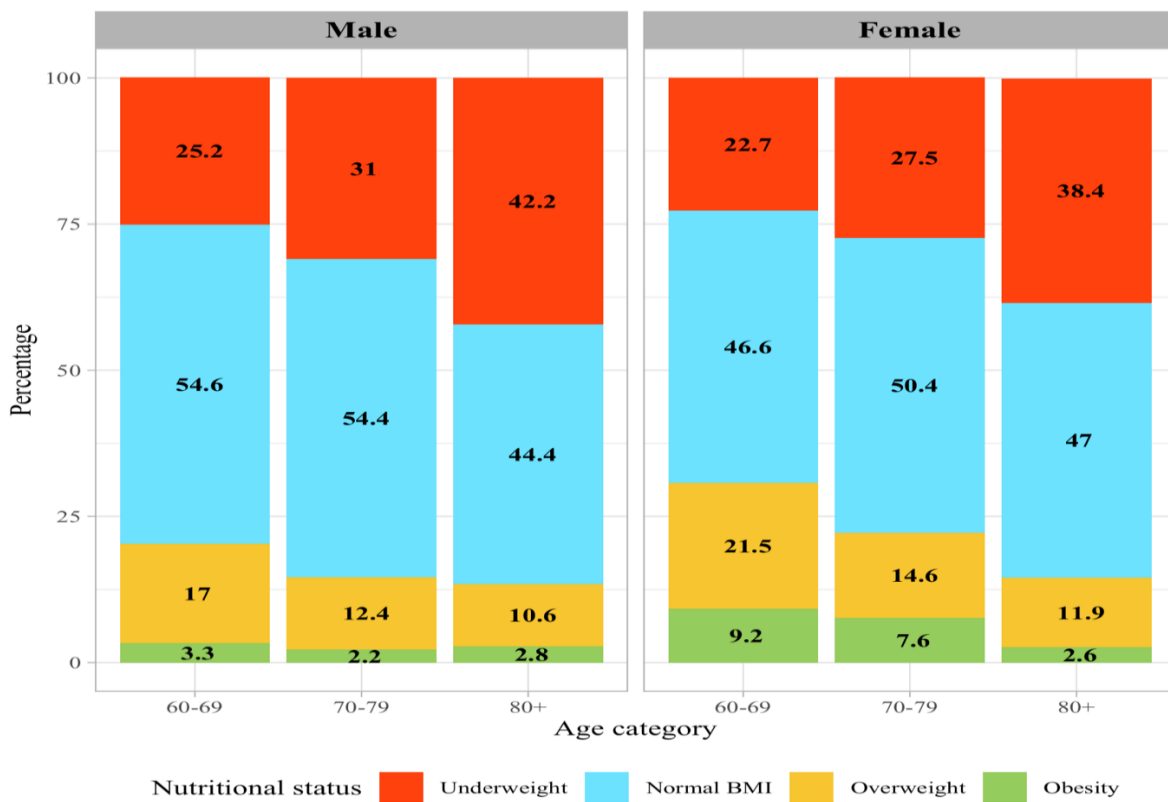
Which of the following conclusions can be drawn from the above statement?

- a) High fever is dangerous for the human body.
- b) Fever-lowering medicines are necessary for treating a viral infection.
- c) One should not take fever lowering medicines during a viral infection.
- d) Fever is a symptom of viral infection and not a cause of it

A fruit vendor claims that all his watermelons are red and sweet. He sells all his watermelons at the end of the day. When can we conclude that he is telling the truth?

- a) I buy a watermelon and it was red and sweet.
- b) The fruit-vendor keeps a watermelon on display for tasting and it is red and sweet.
- c) All but one of his customers share that his watermelon was red but not sweet.
- d) All his customers share that their watermelons were red and sweet.

The graph below shows the nutritional status of population aged 60 years and above, by age and sex.



(Source: India Ageing Report 2023)

Percentage of Males and Females in the age group 70-79 who are Overweight and Obese

- a) 66.8% and 22.2%
- b) 14.6% and 7.6%
- c) 14.6% and 22.2%
- d) 20.3% and 30.7%

Age group where greater proportion of men are Obese when compared to women

- a) 60-69 years

- b) 70-79 years
- c) 80+
- d) None of the above

If there are 8700 males and 9800 females between 60-69 years, then how many of them have Normal BMI

- a) 4750 women & 4567 men
- b) 4750 men & 4567 women
- c) 3950 men & 5233 women
- d) 5233 men & 3950 women

The following are accident statistics from a state in central India

Year	Total Accidents	Road Accidents	Industrial Accidents	Rail Accidents	Others
2020	20,000	14,500	3,200	1,800	1,500
2021	21,500	15,200	3,700	1,600	2,000
2022	22,000	16,800	3,300	1,700	1,200

In which year did the percentage increase in total accidents from the previous year exceed 5%?

- a) 2020
- b) 2021
- c) 2022
- d) None of the above

What was the average number of accidents in the "Others" category over the three years?

- a) 1,566
- b) 1,676
- c) 1,724
- d) 1,426

It is predicted that the industrial accidents in 2023 is likely to reduce by 10% from 2022. In that case what would be the approximate number of industrial accidents in 2023?

- a) 3,000
- b) 1,870
- c) 3,630
- d) 2,970

In which year did the combined number of rail and other accidents exceed the number of industrial accidents?

- a) 2020
- b) 2021

- c) 2022
- d) All of the above

Read the following paragraph and answer the questions that follow.

In India in 2010-11, the Gross Enrolment Ratio (GER) at the primary level was 116 with little gender gap, but at the upper primary level it drops to 85.5 (boys 87.7 and girls 83.1). In the same year, it drops even further to 65 (boys 69 and girls 60.8) in Classes IX and X, and to 39.3 (boys 42.2 and girls 36.1) in Classes XI and XII. In the same year, in higher education, the GER was 16%, while the global average was 27%. By 2015, the GER for primary and upper primary were 116 (girls 116.3) and 85.2 (82.9 girls) respectively. For the same year, the GER for Class IX and X was 65.2 (girls 60.9) and that of Class XI and XII was 39.4 (girls 36.2).

(Source: Adapted from Inside Indian Schools: The Enigma of Equity and Quality, Vimala Ramachandran.)

Which of the following statements are not correct about GER for 2010-11 and 2015?

- a) GER at primary level remained the same.
- b) GER at upper primary has decreased marginally.
- c) GER at Class IX and X and XI and XII have increased marginally.
- d) GER is increasing from primary to higher secondary levels.

As per the data of 2010-11, what is the percentage point drop in GER from upper primary to high school (IX and X) level?

- a) 20.5
- b) 46
- c) 46.2
- d) 16

What is the difference between national GER at higher education level from global average in percentage point?

- a) 16
- b) 11
- c) 27
- d) 21.5

Read the following paragraph and answer the questions that follow.

Though school dropout rates have improved since 2013-2014, there has been some reversal of gains since COVID-19, especially in the younger classes. In 2019-2020, the total dropout rate in primary school was 1.5%, which fell to 0.8% in 2020-2021, but rose back to 1.5% in 2021-2022. However, this is significantly better than the 4.7% dropout rate in 2013-2014.

(Source: The Hindu)

Which of the following statements is true, in light of the paragraph above?

- a) The number of children dropping out of school reduced due to Covid
- b) Covid has no impact on number of school going children
- c) During Covid the school dropout rates were poorer than those in 2013-14
- d) The dropout rate improved in 2020-21 over 2019-20.

Among which of the following years the primary school dropout rates were the best?

- a) 2013-14
- b) 2019-20
- c) 2020-21
- d) 2021-22

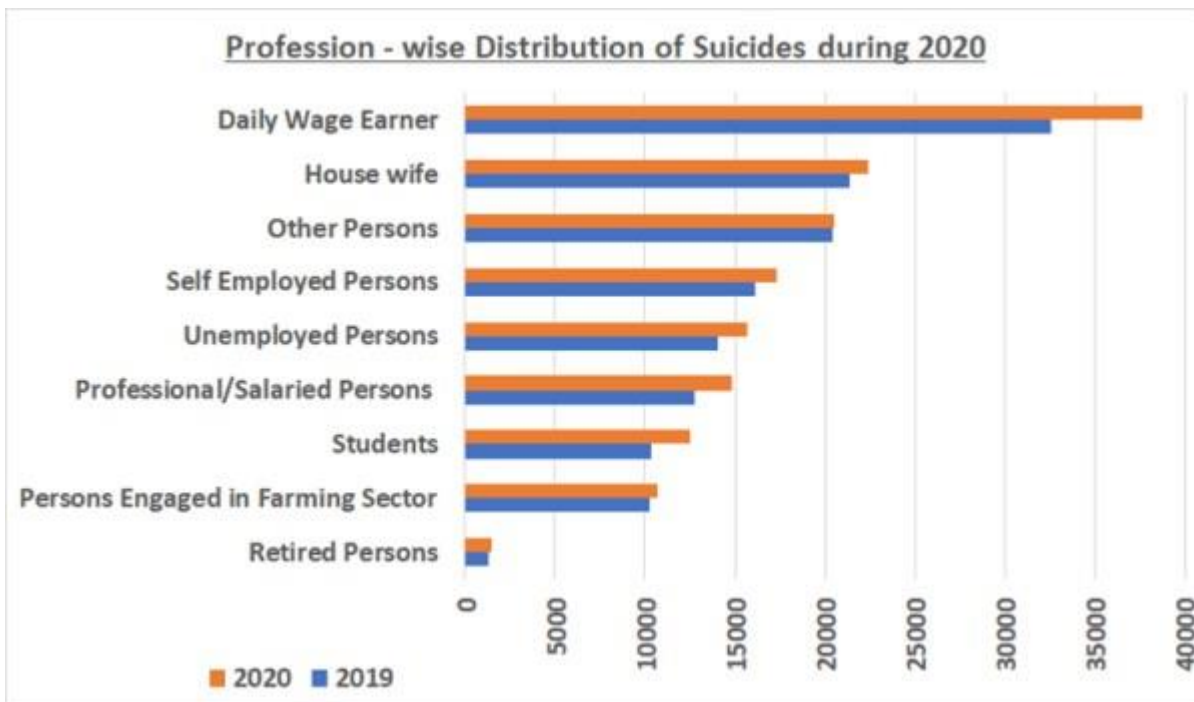
In which of the following years the primary school dropout rate was same as 2021-22?

- a) 2017-18
- b) 2019-20
- c) 2013-14
- d) 2020-21

Among which of the following years the primary school dropout rates were worst?

- a) 2013-14
- b) 2019-20
- c) 2020-21
- d) 2021-22

The following graph shows the profession-wise distribution of suicides. Answer the questions that follow.



(Source: Accidental Deaths & Suicides in India Report 2020, National Crime Records Bureau)

Which of the following options is the best approximation of the number of self-employed persons who committed suicide in the year 2019?

- a) Between 5000 and 10000
- b) Between 10000 and 15000
- c) Between 15000 and 20000
- d) Between 20000 and 25000

Between 2019 and 2020, for which of the following categories of people has the rate of increase in suicides the maximum?

- a) Housewife
- b) Self-employed persons
- c) Persons Engaged in Farming Sector
- d) Students

Which of the following statements are true in the context of the graph given above?

- a) Retired persons had a better sense of well-being in 2019 and 2020
- b) In the year 2020, more than 3000 daily wage earners committed suicide compared to 2019
- c) 50 more house wives have committed suicide in the year 2020 than 2019
- d) There is no change in the number of suicides in persons engaged in farming sector

Read the area, production, and yield of major crops cultivated in India and answer the given questions.

Area, production and yield of major Crops

Crops	Area (Lakh hectare)			Production (Million Tonnes)			Yield (kg/hectare)		
	2019-20	2020-21	2021-22*	2019-20	2020-21	2021-22*	2019-20	2020-21	2021-22*
Rice	436.62	457.69	463.79	118.87	124.37	130.29	2722	2717	2809
Wheat	313.57	311.25	304.69	107.86	109.59	106.84	3440	3521	3507
Nutri / Coarse cereals	239.88	241.18	226.52	47.75	51.32	50.90	1991	2128	2247
Pulses	279.87	287.83	310.30	23.03	25.46	27.69	823	885	892
Foodgrains	1269.95	1297.95	1305.3	297.50	310.74	315.72	2343	2394	2419
Oilseeds	271.39	288.33	291.67	33.22	35.95	37.70	1224	1247	1292
Sugarcane	46.03	48.51	51.48	370.50	405.40	431.81	80497	83566	83887
Cotton@	134.77	132.86	119.10	36.07	35.25	31.20	455	451	445
Jute & Mesta#	6.73	6.62	6.86	9.88	9.35	10.32	2641	2542	2709

* 4th advance estimates @ Production in million bales of 170 kg each

Production in million bales of 180 Kg. each.

(Source: Annual Report 2022-23, Department of Agriculture & Farmers Welfare, Ministry of Agriculture & Farmers Welfare, Government of India)

Choose the two crops for which cultivated area steadily decreased over the period 2019-2022.

- Wheat and Coarse cereals
- Cotton and Wheat
- Cotton and Coarse cereals
- Rice and Pulses

Choose the crop for which cultivated area in 2021-22 has decreased in comparison to 2019-20 but the total production has increased.

- Coarse cereals
- Rice
- Oilseeds
- Cotton

What is the difference in yield of rice and wheat in the year 2020-21 when compared to 2019-20?

- 92 kg/hectare and -14 kg/hectare
- 5 kg/hectare and 81 kg/hectare
- 5 kg/hectare and 81 kg/hectare
- 87 kg/hectare and 67 kg/hectare

What is the percentage decrease in the yield of wheat from 2020-21 to 2021-22?

- 0.39%

- b) 3.4%
- c) 0.23%
- d) 4%

The table below shows the works carried out under MNREGA in the central districts of Kerala from its inception and also in the last two years. Answer the questions that follow

Row Labels	Sum of Complete Work in 2022-2023	Sum of Complete Work in 2021-2022	Sum of Completed Work Since Inception
Anganwadi/Other Rural Infrastructure	71	152	413
Bharat Nirman Sewa Kendra	0	0	6
Coastal Areas	0	0	1
Drought Proofing	213	158	2746
Fisheries	0	5	106
Flood Control and Protection	59	110	11787
Land Development	1085	1536	12707
Micro Irrigation Works	496	787	12373
Other Works	7	0	164
Play Ground	0	0	21
Renovation of traditional water bodies	380	622	21661
Rural Connectivity	234	554	3422
Rural Drinking Water	3	6	928
Rural Sanitation	99	63	2690
Water Conservation and Water Harvesting	1402	1996	24115
Works on Individuals Land (Category IV)	4435	7973	60626
Grand Total	8492	13971	153773

What is the ratio of Anganwadi / Other rural infrastructure projects completed in the year 2022-23 to the year 2021-22?

- a) 0.46
- b) 0.56
- c) 0.50
- d) 0.23

What percentage of the total number of projects in the year 2022-23 was done on Land Development?

- a) 13.75%
- b) 12.77%
- c) 14.03%
- d) 11.90%

Which among the following saw the highest increase in the number of projects in the year 2022-23 as compared to 2021-22?

- a) Rural Sanitation
- b) Rural Connectivity
- c) Drought Proofing
- d) Other works

Arrange the following works in ascending order of their total number of projects completed since inception of MNREGA.

- A – Works on Individual Land
- B – Rural Sanitation
- C – Renovation of Traditional Water bodies
- D – Land Development

- a) B, D, C, A
- b) A, C, D, B
- c) A, D, C, B
- d) B, C, D, A

Following table gives the number of deaths officially reported in Bhopal during the first and second waves of COVID-19 pandemic as per their status of exposure to the tragic Bhopal Gas Tragedy of 1984. Answer the questions (Question No. 16, 17, 18 and 19) that follow.

	Gas-exposed	Gas-unexposed
Wave-1 (April 2020 to February 2021)	300	351
Wave-2 (March 2021 to July 2021)	153	375

Source (adapted from): Dhingra, R., Sarangi, S., Chatterjee, P., Gun, A., Sarkar, S., 2024. COVID-19 mortality in 1984 Bhopal gas tragedy survivors: implications for chemically exposed populations. Transactions of The Royal Society of Tropical Medicine and Hygiene traef010. <https://doi.org/10.1093/trstmh/traef010>

What is the total number of deaths among gas-exposed and gas-unexposed people in Bhopal during the first and second waves of COVID-19 pandemic (April 2020 to July 2021)?

- a) 300 and 153, respectively
- b) 651 and 528, respectively
- c) 453 and 726, respectively
- d) 351 and 375, respectively

The above deaths happened over a period of 16 months of COVID-19 pandemic (from April 2020 to July 2021). Suppose that equal number of deaths occurred in each of these 16 months. Now, at this rate, how many deaths would have occurred in a year (i.e. in a 12-month period instead of a 16-month period) among the gas-exposed and gas-unexposed group?

- a) 340 and 545, respectively
- b) 604 and 968, respectively
- c) 300 and 351, respectively

d) 488 and 396, respectively

The population of gas-exposed people in Bhopal is around 4 lakhs. How many gas-exposed people died during COVID-19 in both the waves of the pandemic?

- a) 1.13 per lakh
- b) 1130 per lakh
- c) 113 per lakh
- d) 11.3 per lakh

The estimated total of gas unexposed population of Bhopal is around 21 lakhs. How many gas-unexposed people died during the first wave of the COVID-19 pandemic?

- a) 16.7 per lakh
- b) 17.8 per lakh
- c) 167 per lakh
- d) 178 per lakh

Statements: All fruits are green in colour. All mangoes are fruits.
Given the above two statements, which of the conclusions follow.

Conclusions:

- I. Some mangoes are not green in colour.
- II. All fruits are mangoes.

- a) Only conclusion I follows
- b) Only conclusion II follows
- c) Neither I nor II follows
- d) Both I and II follow

If P is the sister of Q; Q is the brother of R; and R is the mother of S, how S is related to P?

- a) Brother
- b) Sister
- c) Nephew
- d) Cannot be determined

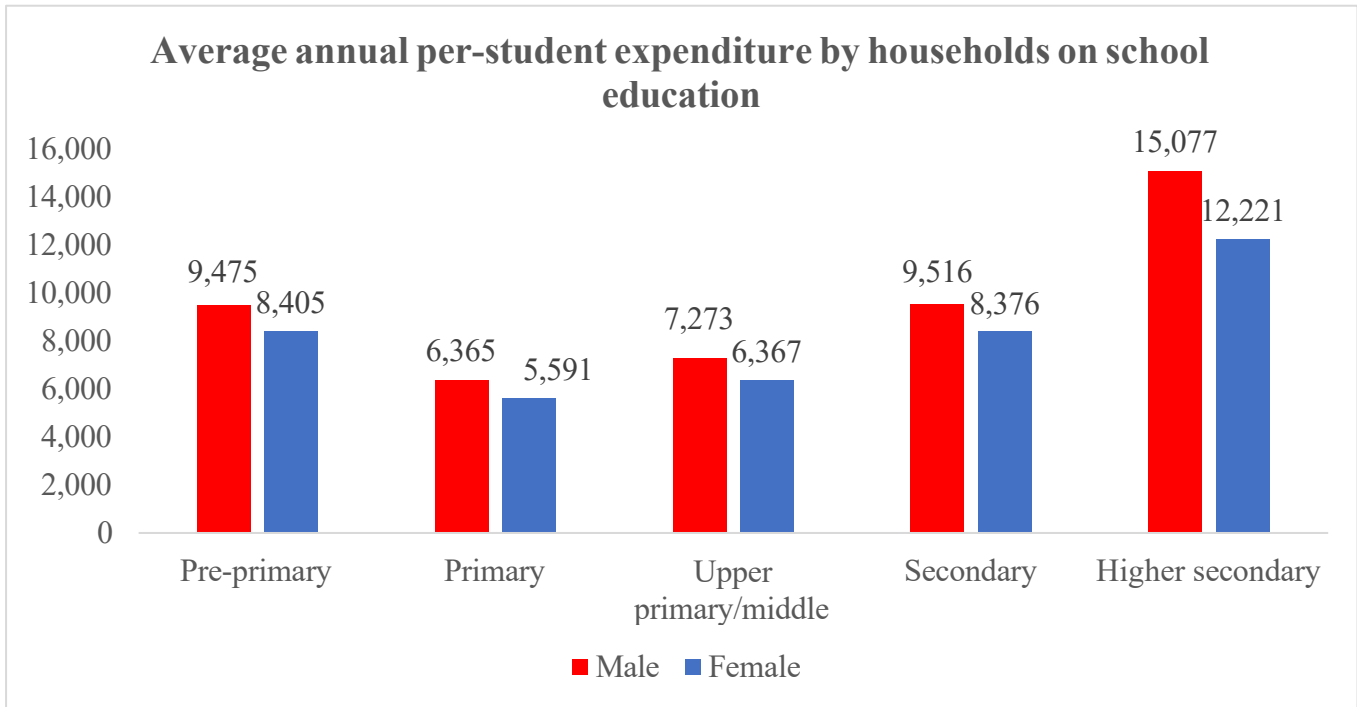
Five students in a class A, B, C, D and E have different heights. Height of A is less than only two students. Height of B is more than only one student. Height of C is smaller than D and height of D is smaller than E. How many students are smaller than D?

- a) One
- b) Two
- c) Three
- d) Four

Fahad starts walking from his home. He walks 5 km towards East and then takes a right and walks for 8 km. Then he again turns right and walks for 5 km. What is Fahad's position with respect to his starting point?

- a) 5 km North
- b) 5 km South
- c) 8 km East
- d) 8 km South

The following graph shows the average expenditure incurred by a family on child’s school education. Answer the following questions (Question No. 24, 25, 26, 27) based on the graph.



Source: National Sample Survey Office (NSSO), 75th round, “Household Social Consumption: Education”, 2017-18

The gap between average expenditure on education between males and females is highest in

- a. Higher secondary
- b. Secondary
- c. Primary
- d. Upper primary/ middle

If a household has a male child studying in pre-primary school and a girl child studying in higher secondary. Then on an average how much do they spend on the education of their children

- a. 20,668
- b. 23,482
- c. 21,696
- d. 18,586

How does the average annual per-child expenditure by households on school education for males compares to females

- a. Households spend the same on males and females.
- b. Households spend more on males.
- c. Households spend more on females.
- d. Households spend more on females when compared to males for higher education.

Which of the following statement is true-

- I. Expenditure by households for Pre-primary education is more when compared to Primary education.
- II. The average expenditure by households for Higher secondary education is four times that of what households spend for primary education.

- a. Only I is true.
- b. Only II is true.
- c. Both I and II are true.
- d. Both I and II are false.

Following is an excerpt from the National Family Health Survey (NFHS-5) report on Madhya Pradesh. Based on the given information, answer the following questions (Question No. 28, 29, 30).

Safe sanitation is one of the foundations of a healthy, comfortable, and dignified life. Households without proper sanitation facilities have a greater risk of diseases like diarrhoea, dysentery, and typhoid than households with improved sanitation facilities that are not shared with other households.

Just over one-fourth (26%) of all households (33% in rural areas and 7% in urban areas) do not use any sanitation facility; they use open spaces or fields. In Madhya Pradesh, 76 percent of households have access to a toilet facility, with a much higher accessibility in urban areas (94%) than in rural areas (70%). Access to a toilet facility ranges from 64 percent among scheduled tribe households to 88 percent among households which are not scheduled caste, scheduled tribe, or other backward class households. Access to a toilet facility varies widely across the districts, ranging from 52 percent in Damoh district (much lower (44%) in the rural areas) to 98 percent in Indore district. At least 99 percent of urban households have access to a toilet facility in ten districts (Indore, Betul, Ratlam, Alirajpur, Narsimhapur, Khandwa (East Nimar), Bhopal, Dewas, Jhabua and Mandla).

Percentage of Indian households that use any kind of toilet facility-

- a. 26
- b. 76
- c. 24
- d. 74

Which of the following statements is true?

Statement 1: Greater percentage of households in urban areas don't use any sanitation facility when compared to rural areas.

Statement 2: 88% of households belonging to Scheduled Caste have access to toilet facility.

- a. Only Statement 1 is true.
- b. Only Statement 2 is true.
- c. Both Statement 1 and 2 is true.
- d. Both Statement 1 and 2 is false.

District where less than 90 percent of urban households have access to a toilet facility-

- a. Betul
- b. Bhopal

- c. Damoh
- d. Dewas

Answer questions based on the following table

Category	Numbers of Students (in Lakh)						Pass percentage		
	Appeared*			Passed#					
	Male	Female	Total	Male	Female	Total	Male	Female	Total
All	93.8	73.5	167.3	68.6	56.9	125.5	73.2	77.4	75.0
SC	15.2	11.7	26.9	10.2	8.3	18.5	67.2	71.3	69.0
ST	6.1	4.8	10.9	3.8	2.9	6.7	62.4	61.5	62.0

Which of the following statements is false?

- a) The pass percentage of SC students was better than ST students
- b) The pass percentage of all students together was better than both SC and ST students.
- c) The pass percentage of SC boys was poorer than SC girls.
- d) The pass percentage of ST boys was poorer than ST girls.

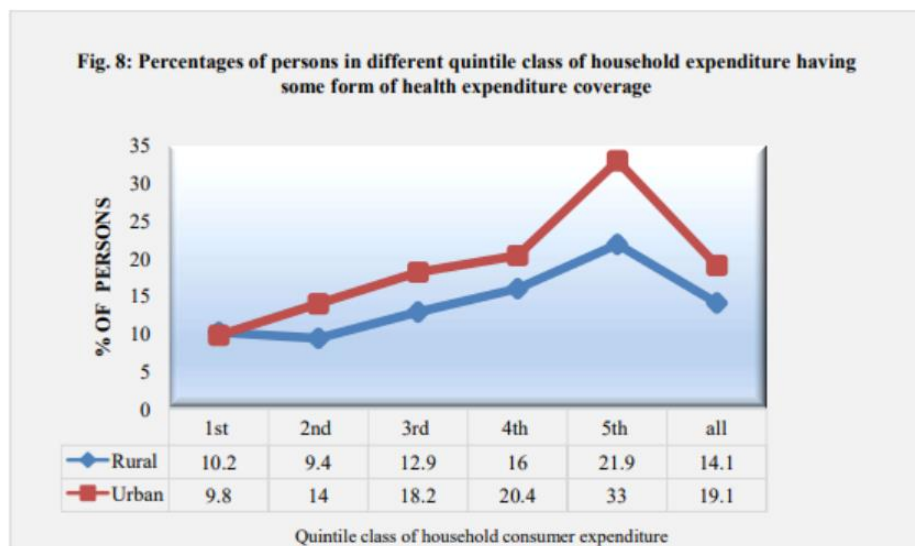
How many total ST females (approx.) failed in the exam?

- a) 1,90,000
- b) 2,90,000
- c) 4,80,000
- d) 7,70,000

The percentage of SC girls appearing for the exam from the total number of SC students appearing for the exam is,

- a) 8.3%
- b) 11.7%
- c) 43.5%
- d) 71.3%

Answer questions based on the following chart



What percentage of the population in rural and urban areas didn't have any healthcare coverage

- a) 85.9 and 80.9
- b) 21.9 and 33
- c) 78.1 and 67
- d) 10.2 and 9.8

What percentage of the population from 3rd quintile from rural areas and 4th quintile from urban areas didn't have any healthcare coverage

- a) 87.1 and 79.6
- b) 87.1 and 68
- c) 87 and 79.6
- d) None of the above

The data shows health expenditure coverage is higher in urban areas as compared to rural areas for the whole population.

- a) True
- b) False
- c) Cannot be said from the above data
- d) None of the above

Health expenditure coverage among urban population in the 1st quintile is higher than the rural population in the same quintile.

- a) False
- b) True
- c) Cannot be said from the above data
- d) None of the above

Answer questions based on the following passage:

Though school dropout rates have improved since 2013-2014, there has been some reversal of gains since COVID-19, especially in the primary classes. In 2019-2020, the total dropout rate in primary school was 1.5%, which fell to 0.8% in 2020-2021, but rose back to 1.5% in 2021-2022. However, this is significantly better than the 4.7% dropout rate in 2013-2014. (Source: The Hindu)

Which of the following statements is true?

- a) The number of children dropping out of school reduced due to Covid
- b) Covid has no impact on number of school going children
- c) During Covid the school drop out rates were poorer than those in 2013-14
- d) In the second year of Covid, the drop out rate of primary school children improved compared to the first year.

Among which of the following years, the primary school drop out rates were lowest?

- a) 2013-14
- b) 2019-20
- c) 2020-21
- d) 2021-22

The primary school drop out rates in the year 2021-22 were same as those in year, a) 2017-18 b) 2019-20 c) 2013-14 d) 2020-21 All dogs bark. Jack is a dog. Therefore, Jack barks. Is this conclusion valid?

- a) Yes, the conclusion is valid.

- b) No, it is not valid.
- c) Both A and B are incorrect.
- d) Can't be determined from the statement.

If it rains, the ground gets wet. It is not raining. Can we conclude that the ground is not wet?

- a) Yes, we can conclude that the ground is wet.
- b) No, we cannot conclude that the ground is not wet.
- c) Both A and B are incorrect.
- d) Ground is wet and it will rain.

If BORN is written as ROBIN, GOLD is written as LOGID and MILK is written as LIMIK, GOAT will be written as

- a) AOGIT
- b) GOTIA
- c) TOGIA
- d) GOAIT

The angle between hour hand and minute hand when clock is showing 6:30, will be

- a) 0 deg.
- b) 15 deg.
- c) 30 deg.
- d) 360 deg.

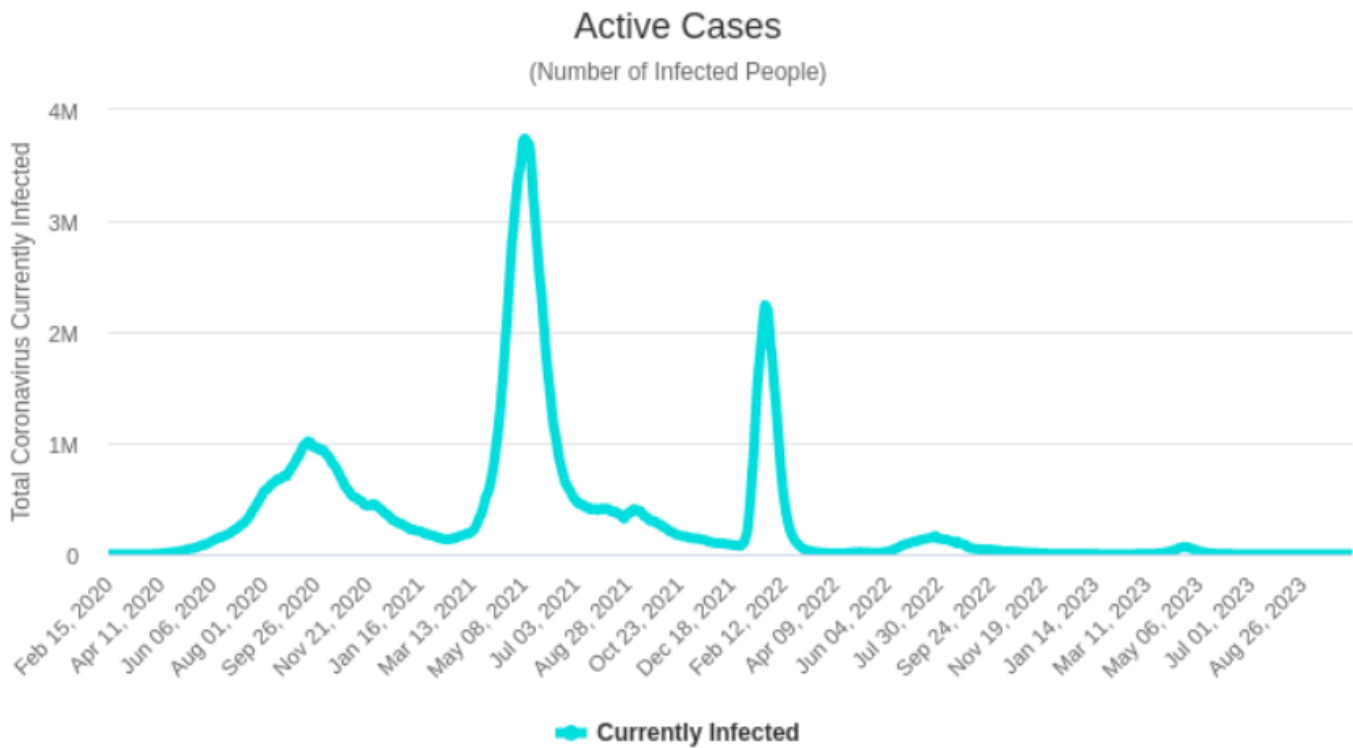
Statement 1: Cycling is a good cardiovascular exercise.

Statement 2: It is advised not to do cycling immediately after a knee injury.

Which of the following conclusions can be drawn from the above 2 statements?

- i. Cycling is bad for knee health. ii. Cycling helps improve heart function.
- a) Only (i)
- b) Only (ii)
- c) Both (i) and (ii)
- d) Neither (i) nor (ii)

Answer questions 1 to 4 based on the following chart



(Note: 1M on y-axis = 1 Million = 10 Lakhs)

Among given months, which month saw the least number of active cases of Covid 19

- September 2020
- July 2022
- July 2021
- August 2020

The total number of active cases of Covid 19 in the month of October 2021 were,

- Less than 20 lakh but more than 10 lakh
- More than 5 lakh but less than 10 lakh
- Less than 5 lakh
- No active cases reported

Which of the following months was worst in terms of COVID-19 infections?

- February 2022
- May 2021
- August 2020
- July 2021

Which of the following statements is false?

- In the year 2020, the total number of active cases never went beyond 15 lakh.
- The year 2023 saw life returning back to normal.
- The number of active cases in India never rose above 40 lakhs.
- In the year 2023 no active cases of covid were reported.

Answer questions 5 to 7 based on the following table:

Average Out-of-Pocket Medical Expenditure (Rs.) per Childbirth case

RURAL	1 st quintile	2 nd quintile	3 rd quintile	4 th quintile	5 th quintile	All
Govt./ Public Hospital	1095	1270	1286	1461	1559	1305
Private Hospital	14710	16244	16270	19171	21805	18501
Charitable Trust / NGO-run hospital	9815	10041	11073	9807	13035	11060
All	2894	3800	4504	6390	9879	5357

URBAN	1 st quintile	2 nd quintile	3 rd quintile	4 th quintile	5 th quintile	All
Govt./ Public Hospital	1616	1926	2092	2138	1992	1874
Private Hospital	18675	20719	29364	26056	28857	25096
Charitable Trust / NGO-run hospital	14765	14987	12742	23395	24989	16463
All	7206	9002	15876	17660	23599	13292

Population from which quintile are incurring highest per capita expenses at government facilities in rural areas?

(A quintile is a way of dividing a set of data into five equal parts to help compare different portions of a distribution. Each quintile represents 20% of the data, with the first quintile containing the lowest values and the fifth quintile containing the highest values.)

- a) 4 th quintile
- b) 5 th quintile
- c) 3rd quintile
- d) 1 st quintile

Per capita expenditure for childbirth is higher in rural areas than in urban areas

- a) True
- b) False
- c) Cannot be determined
- d) None of the above

What percentage of expenditure does a person from the 1st quintile in a rural area spend in comparison to an urban person in the same quintile at a government facility?

- a) 67.76%
- b) 67.99%
- c) 63%
- d) 55%

Answer questions 8 to 10 based on the following passage:

Company X and Company Y are competitors in three product segments: high-end, midrange, and budget.

- In the high-end segment, Company X holds 56.5% of the market, generating Rupees 12 million in sales, while Company Y has 32.4% of the market with Rupees 7 million in sales.
- In the mid-range segment, Company X's market share is 50.2% with Rupees 9 million in sales, compared to Company Y's 41.3% share and Rupees 8 million in sales.
- In the budget segment, Company Y leads with a 49.6% market share and Rupees 6.2 million in sales, while Company X holds 39.8% of the market, earning Rupees 4.8 million.

What is the difference between the market share of Company X and Company Y in the high-end segment?

- a) 24.1%
- b) 23.5%
- c) 22.9%
- d) 25.6%

In which product segment does Company Y have an advantage in market share?

- a) High-end segment
- b) Mid-range segment
- c) Budget segment
- d) All segments

What is the ratio of Company Y to Company X sales in the mid-range segment?

- a) 8:9
- b) 9:10
- c) 10:9
- d) 9:8

In a village, there are two types of people: truth-tellers who always tell the truth, and liars who always lie. If a person says, "I am a liar," what are they?

- a) Must be a truth-teller.
- b) Must be a liar.
- c) Cannot be determined.

d) All of A, B, and C are incorrect.

Consider the following sequence of numbers: 2, 4, 8, 14, 22, ____ What number should come next in the sequence?

- a) 32
- b) 30
- c) 34
- d) 28

Ten years ago Alisha was 4 times as old as Nargis. If after 10 years Alisha will be twice as old as Nargis, what is the present age of Alisha?

- a) 20
- b) 40
- c) 50
- d) 60

There are five students in a classroom: A, B, C, D, and E. Each of them plays exactly one sport out of football, cricket, badminton, basketball, and tennis. The following information is known:

- A plays football.
- B does not play cricket or badminton.
- C plays tennis.
- The person who plays basketball is not D.
- E plays either badminton or basketball.

Which sport does D play?

- a) Cricket
- b) Basketball
- c) Badminton
- d) Cannot be determined from the information given.

The price for an international roaming package with mobile service provider X was Rs.500 and with mobile service provider Y was Rs.600 in 2022. The price of the roaming packages increase by Rs.40 for service provider X and Rs.20 for service provider Y every year.

In which subsequent year will both service providers have the same price for their packages?

- a) 2024
- b) 2025
- c) 2030
- d) 2027

The latest global estimates indicate that 160 million children – 63 million girls and 97 million boys – were in child labour globally at the beginning of 2020, accounting for almost 1 in 10 of all children worldwide. Seventy-nine million children – nearly half of all those in child labour – were in hazardous work that directly endangers their health, safety and moral development. (Child labour: Global estimates 2020, Trends and the road forward. A report by International Labour Organization and United Nations Children’s Fund, 2021)

According to the report, around what percentage of the children involved in child labour are in hazardous work?

- a) 10%
- b) 50%
- c) 25%
- d) 75%

What is the percentage difference between the number of boys engaged in child labour and the number of girls engaged in child labour?

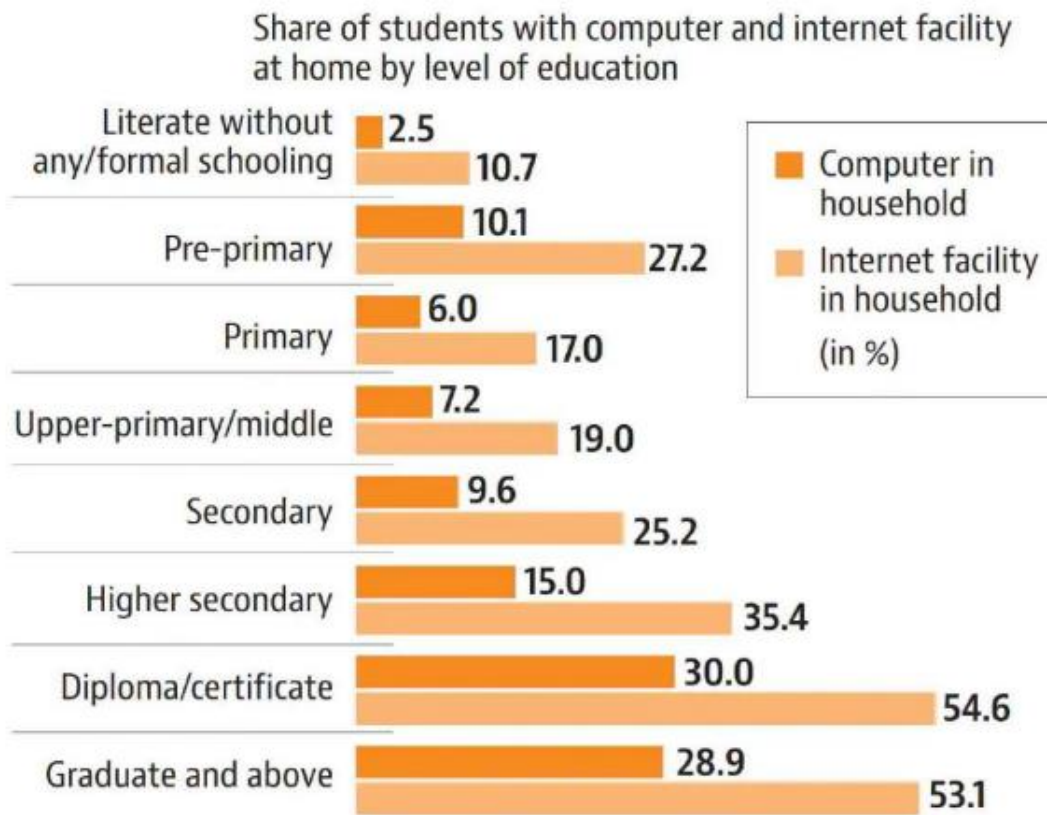
- a) 53.9%

- b) 35.1%
- c) 21.2%
- d) 60.1%

What proportion of children were found to be involved in child labour in 2020 in comparison to the entire population of world's children?

- a) 10%
- b) 47.5%
- c) 50%
- d) Information not available

Given below is a chart showing computer and internet facility at different levels of education. Based on the data in the chart answer the following questions.



Across all levels of education, the percentage of students having internet facility at household is higher than the percentage having a computer.

- a) True
- b) False
- c) Can't Say
- d) None of the above

What is the difference in share of students with computers pursuing higher secondary and diploma certificate levels of education?

- a) 10
- b) 15
- c) 20
- d) 25

Highest share of students with both computer and internet facility at home is observed at which level of education?

- a) Pre-primary
- b) Higher Secondary
- c) Diploma/Certificate
- d) Graduate and Above

Following table shows the distribution of Anganwadi centers, creche and workers in Anganwadi across five districts of Karnataka (2020-21). Answer the questions that follow.

District	Creche	Number of Children	Anganwadi located in own Building	Number of Anganwadi workers	Total number of Anganwadis
Belagavi	104	2600	3181	5174	5331 157
Haveri	8	200	1435	1902	1918 16
Kolar	12	300	1122	2080	2080 0
Chitradurga	45	1125	1724	2324	2333 9
Shivamogga	29	725	1917	2439	2439 0

Source: Karnataka at a glance

Average number of children per creche Chitradurga 9379 14101

- a) 22
- b) 24
- c) 23
- d) 25

Percentage of Anganwadis located in own building

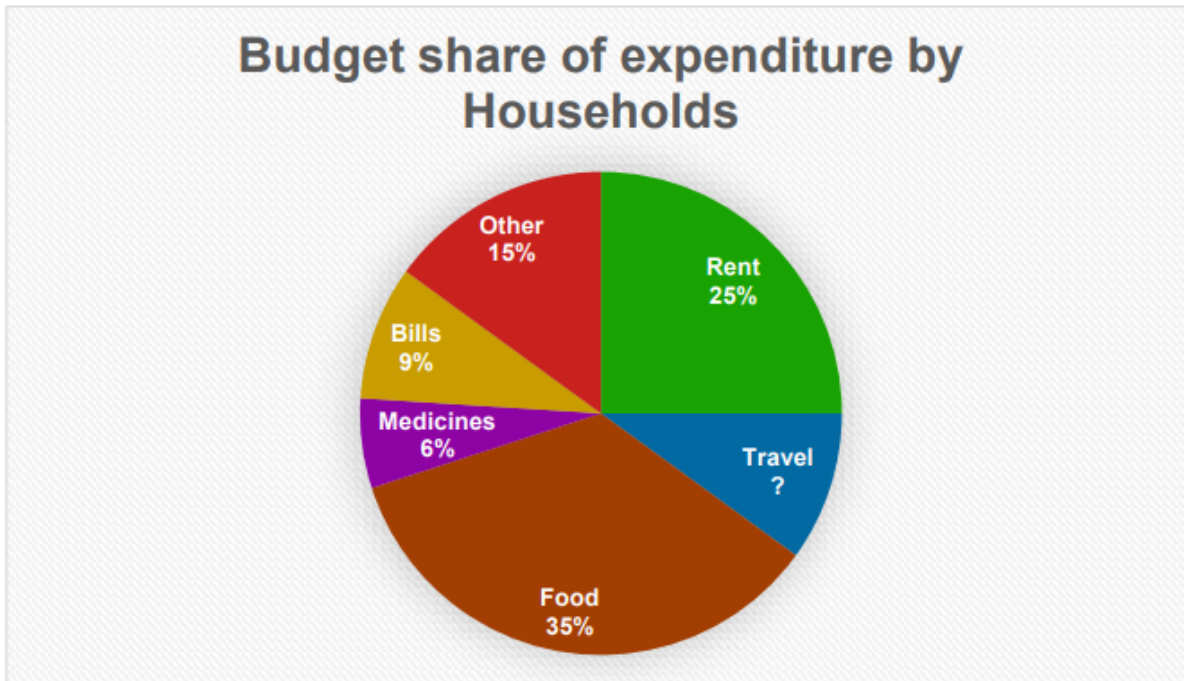
- a) 66.5%
- b) 69.2%
- c) 74%
- d) 79%

Angawadis with shortage of workers in descending order (Each Anganwadi should have one Anganwadi worker)

A. Belagavi B. Haveri C. Kolar
D. Chitradurga E. Shivamogga

- a) B, A, D
- b) A, B, D
- c) B, D, A
- d) D, B, A

The graph below shows the budget share of expenditure by households



Percentage of household expenditure on Travel?

- a) 9
- b) 10
- c) 11
- d) 13

What fraction of the households expenditure is on Rent, Medicines and Bills

- a) $\frac{2}{5}$
- b) $\frac{7}{12}$
- c) $\frac{9}{19}$
- d) $\frac{5}{9}$

If the household has spent Rupees 6000 on Medicines then what is the total expenditure of the household?

- a) 1,10,000
- b) 1,15,000
- c) 1,00,000
- d) 95,000

A woman bought 6 dresses at ₹500 each, 3 jackets at ₹900 each, and 10 handbags at ₹800 each. What is the average expenditure per article?

- a) 721.05
- b) 930.65
- c) 1000.05
- d) 621.05

The average weight of 40 students in a school was calculated as 55 kg. It was later found that the weight of one student was wrongly recorded as 67 kg, whereas their actual weight was 57 kg.

What is the actual average weight of the students? (rounded off to 2 decimal places)

- a) 54.75
- b) 58.25
- c) 53.25

d) 55.05

A travel enthusiast spent ₹78,560 on flight tickets and ₹45,230 on hotel bookings. The remaining 27% of the total amount he had was kept for food and other expenses.

What was the total amount he initially had (rounded value)?

a) 1,69,575

b) 1,75,695

c) 1,55,375

d) 1,89,775